



# IVORY INTERNATIONAL SCHOOL

## NURSERY AND PRIMARY MIXED DAY AND BOARDING

### BULOBA – MITYANA ROAD

COVID-19 LOCKDOWN PACKAGE SET II

YEAR 2 NEW YORK

Name: \_\_\_\_\_

## ENGLISH

### 1. Fill in the missing letters.

l \_\_\_ nd

thi \_\_\_ f

un \_\_\_ f \_\_\_ rm

pol \_\_\_ ce

a \_\_\_ my

### 2. Fill in the gaps with the correct preposition.

a) The bird is flying \_\_\_\_\_ our school.

b) John is hiding \_\_\_\_\_ the door.

c) Jesca was sitting \_\_\_\_\_ the mat.

d) We should listen \_\_\_\_\_ the teachers.

e) I prefer beef \_\_\_\_\_ mutton.

### 3. Write the plural of the word in brackets

a) The children bought many \_\_\_\_\_ at school.  
(umbrella)

b) The \_\_\_\_\_ were too heavy for him to carry. (box)

c) \_\_\_\_\_ lay their eggs in stagnant water. (mosquito)

d) The teacher made many \_\_\_\_\_ for the class. (chart)

e) The children carried the \_\_\_\_\_ to the main hall.  
(bench)

### 4. Write correct sentences using these words.

a) sing \_\_\_\_\_

b) run \_\_\_\_\_

c) cook \_\_\_\_\_

d) drive \_\_\_\_\_

e) comb \_\_\_\_\_

**5. Fill in the gaps using the verbs in brackets.**

a) James is \_\_\_\_\_ the floor now. (sweep)

b) The children are \_\_\_\_\_ their books. (read)

c) We are \_\_\_\_\_ for the bus.

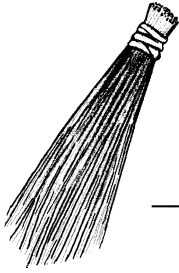
d) They are \_\_\_\_\_ on a large bed. (sleep)

---

**LITERACY 1A**

---

1. What is the use of the item below at your home?



\_\_\_\_\_

2. Give the meaning of the term "**Sanitation**"

\_\_\_\_\_

3. How many body senses do you have?

\_\_\_\_\_

4. Mention one body exercise you wish.

\_\_\_\_\_

5. Which wild animal protects itself by using a tail?

\_\_\_\_\_

6. How can a year two child keep his or body clean?

\_\_\_\_\_

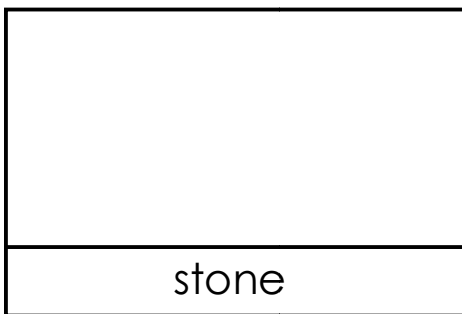
7. What name is given to the young one of a cow?

\_\_\_\_\_

8. Name the part of the sugarcane eaten by people.

\_\_\_\_\_

9. Draw the non-living thing below.



10. Which part of the body is used for walking?

\_\_\_\_\_

## LITERACY 1B

1. A \_\_\_\_\_ is a group of people related by blood or marriage.

b) Mention two people found at home.

i) \_\_\_\_\_

ii) \_\_\_\_\_

2. Draw these strong building materials.

iron sheets	stones	cement

3. Mention two things used to clean the school.

i) \_\_\_\_\_

ii) \_\_\_\_\_



4. Our school is found in \_\_\_\_\_ district.

5. Which school symbol tells pupils to work hard?  
\_\_\_\_\_

6. Name any one common disease at school.  
\_\_\_\_\_

7. A cow is to kraal as a pig is to \_\_\_\_\_.

8. Name these people found in our community.

9. Who heads a school?

---

10. Name the place of work for a farmer.

---

---

## RELIGIOUS EDUCATION

---

1. The group of people related by blood or marriage is called.

\_\_\_\_\_

2. Write down any three leaders in the church family.

i) \_\_\_\_\_

ii) \_\_\_\_\_

iii) \_\_\_\_\_

3. Why are Christians baptized?

i) \_\_\_\_\_

ii) \_\_\_\_\_

iii) \_\_\_\_\_

4. Define the term a prayer.

\_\_\_\_\_

\_\_\_\_\_

5. Mention any two domestic animals that God created.

i) \_\_\_\_\_

ii) \_\_\_\_\_

6. Draw yourself reading the Bible.



7. Write down any one way Christians talk to God.

\_\_\_\_\_

---


**MATHEMATICS**

---


1. Take away  $8 - 7 =$

2. 1 hen =  legs


3. Name the following shapes.



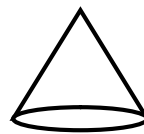
\_\_\_\_\_



\_\_\_\_\_



\_\_\_\_\_



\_\_\_\_\_

4. Which set symbol is this?



\_\_\_\_\_

5. Write place value of the underlined numbers.

2 1 9  
└──┘

1 4  
└──┘

2 7  
└──┘

6. Work out:

$$\begin{array}{r} 3 \quad 3 \\ + 1 \quad 2 \\ \hline \\ \hline \end{array}$$

$$\begin{array}{r} 9 \quad 6 \\ - 6 \quad 0 \\ \hline \\ \hline \end{array}$$

7. Mummy bought 25 cakes. Daddy bought 23 cakes.  
How many cakes did they buy altogether?

8. Clever had 45 mangoes, she gave away 11 mangoes.  
How many mangoes remained?

9. Write in figures:

thirteen \_\_\_\_\_

seventy one \_\_\_\_\_

10. Write in words:

204 \_\_\_\_\_

19 \_\_\_\_\_