



IVORY INTERNATIONAL SCHOOL

NURSERY AND PRIMARY MIXED DAY AND BOARDING

BULOBA – MITYANA ROAD

COVID-19 LOCKDOWN PACKAGE SET II

YEAR 4 PARIS

Name: _____

ENGLISH

In questions 1-4, write the short forms in their fill forms

1. Won't _____
2. Feb _____
3. I'll _____
4. they're _____

For questions 5 – 7, rewrite giving the plural of the underlined word.

5. He works in a coffee factory.

6. John bought a box of books.

7. The spy caught all the thieves.

In questions 8 – 9, use the words to make correct sentences to show that you know their meanings.

8. park _____

9. pack _____

For questions 10 – 11, arrange the word in alphabetical order.

10. choose , catch , cent , cost

11. mark , jump , kneel , order

For questions 12 – 15, rewrite as instructed in brackets.

12. I went to bed. I had finished my supper. (Join the two sentences usingafter.....)

13. She likes singing more than studying. (Use..... prefer.....)

14. Ronald is very old. He cannot walk by himself. (Join the two sentences using sothat.....)

15. The tea is very hot. I cannot take it. (Join the sentences usingtoo.....to.....)

MATHEMATICS

1. Multiply:

$$\begin{array}{r} 3 \quad 8 \\ \times \quad 3 \\ \hline \\ \hline \end{array}$$

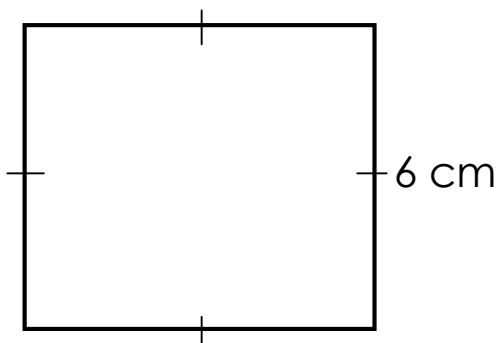
2. Write in figures; **Two thousand four hundred twenty nine.**

3. Add: $\frac{5}{7} + \frac{1}{7} - \frac{3}{7}$

4. Find the missing number:


$$42 \div \square = 6$$

5. Find the distance round the square.



6. How many weeks are in 21 days?

7. How many sides has this figure?



8. Write in expanded form; 8456.

9. Given that $X = \{c, u, p, b, o, a, r, d\}$

Find $n(X)$

SCIENCE

1. Write any one condition necessary for a seed to germinate.

2. State the staple food in your community.

3. Which garden tool helps farmers to transport seedlings to the main garden?


4. Mention any one way of caring for crops in the garden.

5. Suggest any one way of controlling weeds in the garden.

6. Why do some farmers spray herbicides in the garden?

7. Name any one weed eaten by people.

8. In the space provided, draw a garden tool used for transplanting seedlings.



9. In one sentence, give the meaning of the term **crop**.

10. Identify any one example of a common crop grown in your community.

11. What are annual crops?

12. Give at least one example of an annual crop.

13. Mr. Alleluya feeds on cereal. Which class of food does he obtain?

14. Why are cereal crops called monocotyledonous crops?

RELIGIOUS EDUCATION

1. Who created the universe and its occupants?

2. Give any two reasons why God created man last.

i) _____

ii) _____

3. What is meant by the term Exodus?

4. Where was Moses when he received the ten commandments from God?

5. Who did Abraham express his faith in God?

6. Why do Christians fast? Give a reason.

7. Who was the first Christian martyr according to the bible?

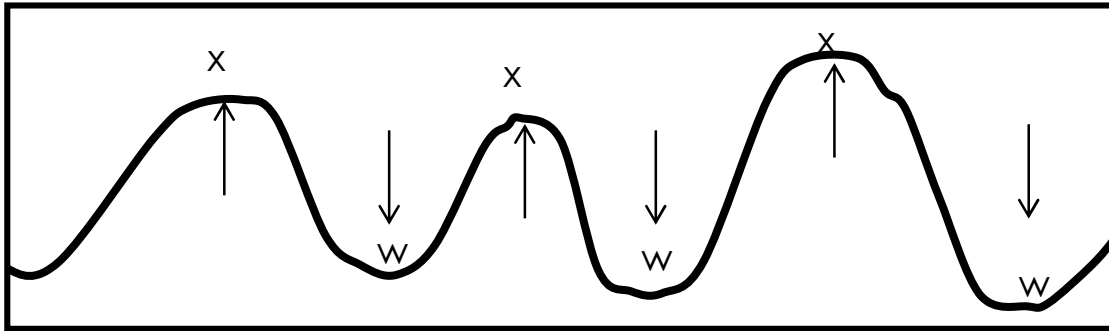
8. In which book of the bible do we find the story of creation?

9. What is a parable?

10. What lesson do Christians learn from the parable of Good Samaritan?

SOCIAL STUDIES

1. Study the diagram and answer the questions.



a) Name the physical features marked:

W _____

X _____

b) Write two problems faces by farmers at physical feature marked **X**.

i) _____

ii) _____

c) Why isn't it good for people to settle in physical feature marked **W**.

2. Write down 5 examples of important places in your districts.

i) _____

ii) _____

iii) _____

iv) _____

v) _____

3. What is trade?

4. What do traders and buyers use as a medium of exchange?

5. Name at least 4 markets in Wakiso district.

i) _____

ii) _____

iii) _____

iv) _____

6. In which two ways are markets important?

i) _____

ii) _____

7. Identify 4 ways in which schools are important.

i) _____

ii) _____

iii) _____

iv) _____