



IVORY INTERNATIONAL SCHOOL

NURSERY AND PRIMARY MIXED DAY AND BOARDING

BULOBA – MITYANA ROAD

COVID-19 LOCKDOWN PACKAGE SET II

YEAR 5 JOHANNESBURG

Name: _____

ENGLISH

In questions 1-3, arrange the words below in alphabetical order.

1. president , perfect , plane , paint

2. sister , baby , foot , heavy

3. mosquito , mouse , mouth , maize

For questions 4 – 7, use the correct form of the words in brackets to complete the sentences.

4. My parents _____ a newspaper daily. (read)

5. Babirye is the _____ girl in our class (beautiful)

6. _____ cloths are normally expensive. (lady)

7. The boys have done their work _____. (quite)

In each of the questions 8 – 9, rewrite giving one word for the underlined group of words.

8. The boys took food to the pig's house.

9. If the man who sells meat comes, buy some meat.

In each of the questions 10 – 12, rewrite giving the opposite of the underlined words.

10. Obedient pupils find it easy to dodge classes.

11. That boy carried the heavy box.

12. An elephant is a thin animal.

For question 13 – 15, rewrite the sentences as instructed in brackets.

13. My father met the mad woman. The mad woman's dress was torn. (Rewrite the sentence usingwhose.....)

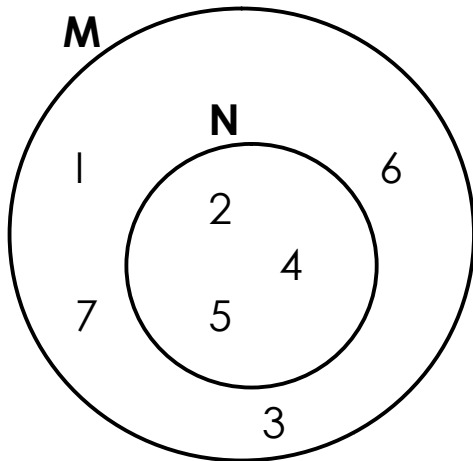
14. An early bird. _____ . (complete the proverb)

15. The load is very heavy. Musa cannot carry it. (Join the two sentences using: too to)

MATHEMATICS

1. Write **XLIX** in words.

2. Given the Venn diagram below.



Find: i) $n(M \cap N)$

ii) $n(M - N)$

3. Round off 247 to the nearest tens.

4. List down all the factors of 16.

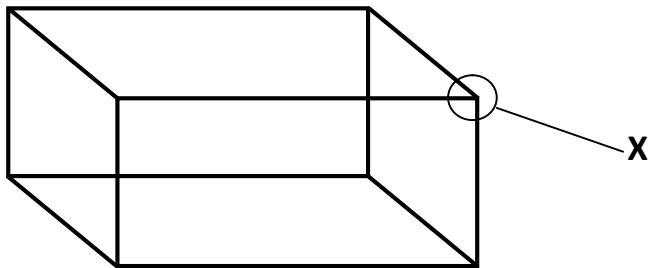
5. Divide:

$$\begin{array}{r} \\ 4 \overline{) 167} \end{array}$$

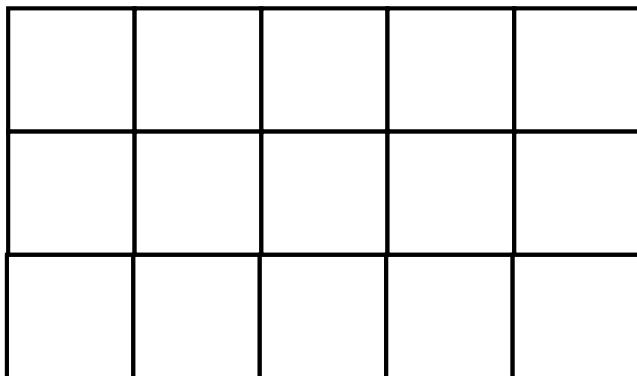
6. Expand 4732 using values.

7. Work out: $2\frac{4}{5} - 1\frac{3}{5}$

8. Name part marked **x**.



9. Shade $\frac{4}{5}$ on the diagram below.



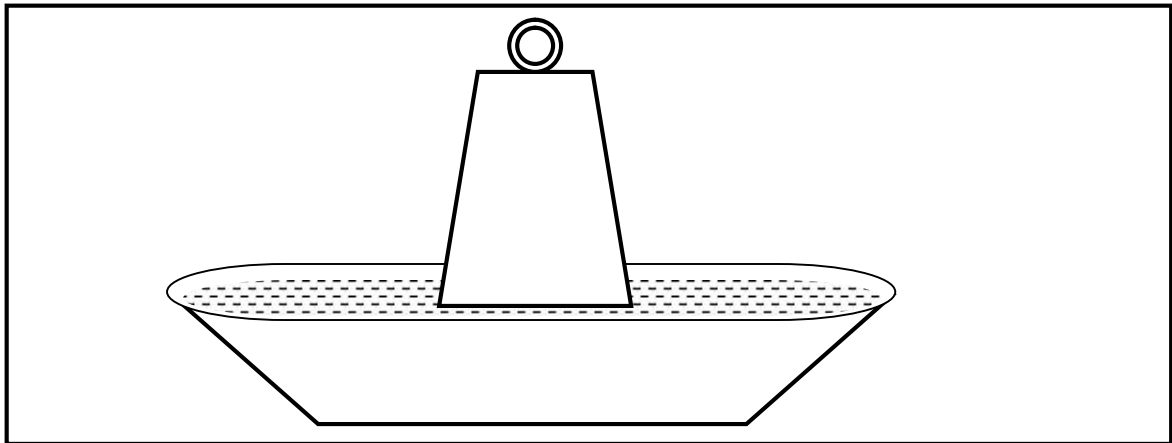
SCIENCE

1. Give one example of poultry.

2. Identify the system of keeping poultry commonly practiced in village areas.

3. Name the small stones found in the gizzard of a bird.

4. a) What name is given to the equipment drawn below?



b) How is the above equipment important in a poultry farm?

5. State any one type of mash.

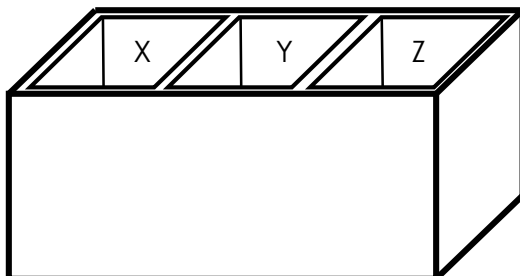
6. What are poultry vices?

7. List down one example of farm records.

8. Which part of an egg holds the Yolk and embryo in one position?

9. How is an egg shell adapted for gaseous exchange in an egg?

10. Use the diagram below to answer the questions that follow



a) Name the parts marked

X _____

Y _____


Z _____

b) How is part marked Y useful to the above beehive?

c) What name is given to the beehive drawn above?

d) Apart from the above type of hive, give any other example of a modern beehive.

11. In the space provided below, draw a Kigezi beehive.



12. Identify the poultry practice shown below.



13. State the importance of the practice shown above.

SOCIAL STUDIES

1. What is the work of a scale on a map?

2. State a reason why people in highland areas terrace their land.

3. Briefly explain the term **climate**.

4. Write down any four elements / factors affecting climate of any given area.
 - i) _____
 - ii) _____
 - iii) _____
 - iv) _____
5. Which weather instrument is used to measure the amount of rainfall received?

6. Mention any one dam that generates hydro electric power along River Niles.

7. What are **physical features**?

8. Write down any three inland ports found on lake Victoria in Uganda.
 - i) _____
 - ii) _____
 - iii) _____
9. Why are rift valley lakes said to be salty?

10. State any two qualities of a good leader.

RELIGIOUS EDUCATION

1. What is faith?

2. Mention any two faithful servants of God according to the bible.

i) _____

ii) _____

3. What lesson do Christians learn from the act of the Uganda martyrs?

4. How can a year 5 pupil help a friend suffering from any sickness?

5. How did Abraham express his faith in God?

6. What is a parable?

7. What lesson do Christians learn from the parable of the prodigal son?

8. Why did Jesus use parables during His teachings?

9. Give any one way how Jesus Christ showed love to His people.

10. Write short notes on the following holydays.

a) Ash Wednesday

b) Palm Sunday

c) Good Friday

d) Easter Sunday

Jina langu ni: _____

1. Tafsin misemo ya kawaida kwa Kiswahili.

- a. As soon as possible _____
- b. At one _____
- c. Bad _____
- d. Classroom _____
- e. Can you help me _____
- f. Come here _____
- g. Come in _____
- h. Do you want _____
- i. I am in hurry _____
- j. Ninaenda kwa joo _____

2. Taja kwa Kiswahili

- sixty _____
- sixty one _____
- sixty two _____
- sixty three _____
- sixty four _____
- sixty five _____
- sixty six _____
- sixty seven _____
- sixty eight _____
- sixty nine _____