



# IVORY INTERNATIONAL SCHOOL

## NURSERY AND PRIMARY MIXED DAY AND BOARDING

BULOBA – MITYANA ROAD

### COVID-19 LOCKDOWN PACKAGE SET II

#### YEAR 6 BEIJING

Name: \_\_\_\_\_

### **ENGLISH**

**In each of the questions 1-5, use the correct form of the word in a bracket to complete the sentence.**

1. The little girls crossed the road \_\_\_\_\_.(careless)
2. My uncle \_\_\_\_\_ a new motorcycle last year.  
(buy)
3. The \_\_\_\_\_ was knocked down by a car yesterday. (cycle)
4. He made an \_\_\_\_\_ over the radio about the accident. (announce)
5. Who was \_\_\_\_\_ in the accident? (injure)

**For questions 6 – 7, arrange the letters to make a correct word**

6. yawghih

\_\_\_\_\_

7. denaccits

\_\_\_\_\_

**In each of the questions 8 -10, rewrite giving one word for the underlined group of words.**

8. Many unfortunate events causing injury happen on our road daily.

\_\_\_\_\_

9. All main roads should have a set of the red, green and yellow lights.

\_\_\_\_\_

10. Can you lend me your strong covering cap worn to protect the head when riding?

\_\_\_\_\_

**In questions 11 – 15, write as instructed in bracket.**

11. I was called in to make a statement. I witnessed the accident. (Rewrite using: .....so .....)
- 
- 
12. No sooner had the car over turned than it hit a cow. (Begin: As soon as .....)
- 
- 
13. The traffic police blew the whistle in order to room the cyclists. (Rewrite using: .....because.....)
- 
- 
14. The driver was very careless. He caused a terrible accident. (Use .....so.....that.....)
- 
- 
15. If the road is not clear, you should not cross it. (Begin: You .....)
- 
- 

**Read the following conversation carefully and in full sentences, answer the questions that follow.**

THE DEBATE

- Othieno** : Good afternoon, Mugira.  
**Mugira** : Good afternoon, Othieno.  
**Othieno** : Are you ready for the debate?  
**Mugira** : Yes I am. And I am sure my side will win.  
**Othieno** : That is impossible! We are going to beat you in this debate.  
**Mugira** : Do you honestly think that children should be forced to speak English at school?  
**Othieno** : Why not? After all the exams are set in English.  
**Mugira** : I don't agree with you. I think children should be given the freedom to use any language they want so as to understand better.

## Questions;

16. How many people are holding this conversation?

---

17. Who are the people holding the conversation?

---

18. What name is given to such a conversation?

---

19. At what time did the pupils have this conversation?

---

20. What was the motion of the debate?

---

21. Who was the third last speaker?

---

22. How many times did each speaker speak?

---

23. Write the opposite of the following;

a. impossible

---

b. agree

---

c. freedom

---

**SECTION A (1 mark each)**

1. Given set  $\mathbf{M} = \{a, b, c, d, e\}$   $\mathbf{N} = \{g, h, f, i, d, e\}$  Find  $n(\mathbf{M})$  complement.
2. What is the number of elements in a set with 4 subsets?
3. There are 5 boys and 12 girls in a certain discussion group in P.6. What is the probability of picking a girl at random to be the group secretary?
4. Expand 87425 using powers.

5. Express thirty two and ninety four hundredths in figures.

6. Round off 719.6 to the nearest whole numbers.

7. Write 746 in Roman numerals.

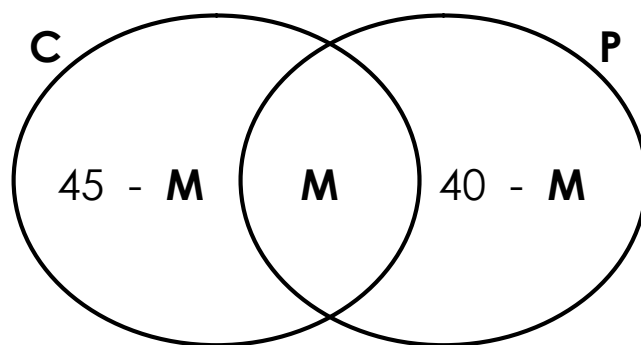
8. What number was expanded to give;  
 $(2 \times 10^4) + (5 \times 10^3) + (9 \times 10^2)$

9. Find the number of proper subsets in a set with 6 members.

10. Add:

$$\begin{array}{r}
 7 \ 0 \ 4 \ 8 \ 2 \ 9 \\
 + 8 \ 5 \ 6 \ 3 \ 1 \ 4 \\
 \hline
 \\
 \hline
 \end{array}$$

11. In a class of 75 children, some like Cassava (**C**) and some like Potatoes (**P**) and **M** like both Cassava and potatoes. The information is on the venn diagram below.



a) Find the value of **M**.

b) How many children liked only one type of food?

c) What is the probability of serving meat to those who like both Cassava and Potatoes at random?

12. a) Use lattice method to multiply 5926 by 73.

b) Work out: 
$$\begin{array}{r} 15 \overline{) 2430} \end{array}$$

---

## SCIENCE

---

1. Why do birds have streamlined bodies?  
\_\_\_\_\_
2. Of what importance is a nictating membrane to birds?  
\_\_\_\_\_
3. Name the group of birds with webbed feet.  
\_\_\_\_\_
4. What name is given to the small stones found in the gizzard of a bird?  
\_\_\_\_\_
5. Besides echidna, identify any other group of mammals.  
\_\_\_\_\_
6. How are cetaceans adapted to living in cold water?  
\_\_\_\_\_
7. Differentiate between oviparous and viviparous animals.  
\_\_\_\_\_
8. Name the limbless reptile.  
\_\_\_\_\_

9. How do tortoises protect themselves from enemies?

---



10. Besides black mamba, cite out any one other example of a poisonous snake.

---

11. Which feature on the feet of a gecko enables it to walk upside down on ceilings.

---

12. Use the diagram below to answer the questions that follow.



---

---

13. What are coelentates?


---

---

14. Apart from the octopus, list down any other example of a mollusc.

---

15. Use the diagram below to answer the questions that follow.



a) To which group of invertebrates does the animal drawn belong?

---

b) In which way is part **y** important to the above organism?

---

c) Which disease is spread by the above organism to humans?

---



---

**SOCIAL STUDIES**

---

1. Why is food regarded to as a basic need of man?

---

2. State one reason why boys and girls should be given equal responsibilities.

---

3. Write down any one local material that can be used to make a bolas.

---

4. How does the legend of the spear and the bead promote discipline?

---

5. What is EALA in full?

---

6. State any one peaceful method that the colonialists applied to acquire colonies in East Africa.

---

7. State one political importance of mountain Elgon.

---

8. Write down one weather hazard caused by heavy rainfall.

---

9. State any one method the government of Uganda has applied to prevent the spread of locusts to other parts of the country.

---

10. What is a project?


---

11. State two reasons why people grow crops.

i) \_\_\_\_\_

ii) \_\_\_\_\_

12. Draw a mallet plant in the space below.



13. What is the direction of Gulu from Kampala?

---

14. Write down one cause of misunderstanding between a school and neighbours.

---

15. The arrow of a compass was pointing to the East from. Which direction was the wind blowing?

---

16. In which way can a year six learner help parents to promote sanitation at home?

---

17. How was Lake Victoria formed?

---

18. Name the member state of the EAC which is completely found in southern hemisphere.

---

19. Give one basic need of a home.

---

---

## RELIGIOUS EDUCATION

---

1. **Either** : On which day do most Christians go for congregational prayers?  
\_\_\_\_\_
- Or** : On which day do most Moslems go for Juma prayers?  
\_\_\_\_\_
2. **Either** : Name the fasting period for Christians.  
\_\_\_\_\_
- Or** : Name the fasting period for Moslems.  
\_\_\_\_\_
3. **Either** : Write down any two greatest commandments in the Bible.  
\_\_\_\_\_
- Or** : Write down any two pillars of the Islamic faith.  
\_\_\_\_\_
4. **Either** : Who is referred to as “a prince of peace”, according to Christians?  
\_\_\_\_\_
- Or** : Who was the last Prophet in Islam?  
\_\_\_\_\_
5. **Either** : From which material were the following people created?  
\_\_\_\_\_
- Or** : From which material were the following people created?  
\_\_\_\_\_
6. **Either** : How was Terah related to Abraham?  
\_\_\_\_\_
- Or** : How was Prophet Muhammad related to Amina?  
\_\_\_\_\_
7. **Either** : Write down one Christian name for boys.  
\_\_\_\_\_

**Or** : Write down one Moslem name for boys.

---

8. **Either** : State the last miracle to be performed by Jesus Christ.

---

**Or** : Name the first slave convert in Islam.

---

9. **Either** : Write TASO in full.

---

**Or** : Write UMSC in full.

---

10. **Either** : Who wrote the book of Mathew according to Christianity?

---

**Or** : Which Prophet in Islam received the book of Injir?

---

11. **Either** : Give any one symbol of a Christian family.

---

**Or** : Give any one symbol of Islamic faith.

---

12. **Either** : Why did Cain kill Abel?

---

**Or** : In which one way can a true Moslem child show respect to the elders?

---

13. **Either** : Who is a priest?

---

**Or** : Who is an Imam?

---

14. **Either** : State one factor which makes a Bible different from other books.

---

**Or** : State one factor which makes a Quran different from other books.

---

15. **Either** : Who is the main source of talents according to Christianity?

---

**Or** : Who is the main source of talents according to Islam?

---

16. **Either** : Mention one way people show respect to God during prayers.

---

**Or** : Mention one way people show respect to Allah during prayers

---

17. **Either** : What is Holy trinity?

---

**Or** : What is Hegira?

---

18. **For Both:** State one difference between Christians and Moslems.

---

---