

IVORY INTERNATIONAL SCHOOL

KINDERGARTEN AND PRIMARY MIXED DAY AND BOARDING

BULOBA – MITYANA ROAD

YEAR 1 SYDNEY

COVID-19 LOCKDOWN PACKAGE SET III

ENGLISH

NAME:

1. Complete words correctly.

ho__se

windo __

de__k

pe__cil

2. Change the words to small letters.

CHAIR _____

WHITEBOARD _____

COMPUTER _____

TEACHER _____

3.



This is a _____.



I can see _____ pencils.



These are _____.

4. Circle the correct word.

anle uanle uncl

unt aunt uant

5. Give the opposites of the following words.

come go

small _____

boy _____

mother _____

sister _____

6. Complete the sentences correctly.



The birds are flying _____ the tree.



The dog is _____ the chair.



The ball is _____ the table.

under on over

7. Complete these words by adding ing.

cook cooking

play _____

read _____

dance _____

bite _____

8. Read the story.

There are seven days in a week. Sunday is the first day of the week. We go to pray on Friday and Sunday.

Questions


a) How many days are in a week?

b) What is the first day of the week?

c) We go to pray on _____ and _____

d) The last day of the week is _____.

9.



The boys are _____ football.



She is _____ the compound.



Daddy is _____ in the garden.

10. Write in short form.

teacher

tr

school

Monday

February

11. Draw the picture.



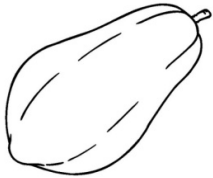

Goat	Cow	Sheep	Lion

12. Write in words.

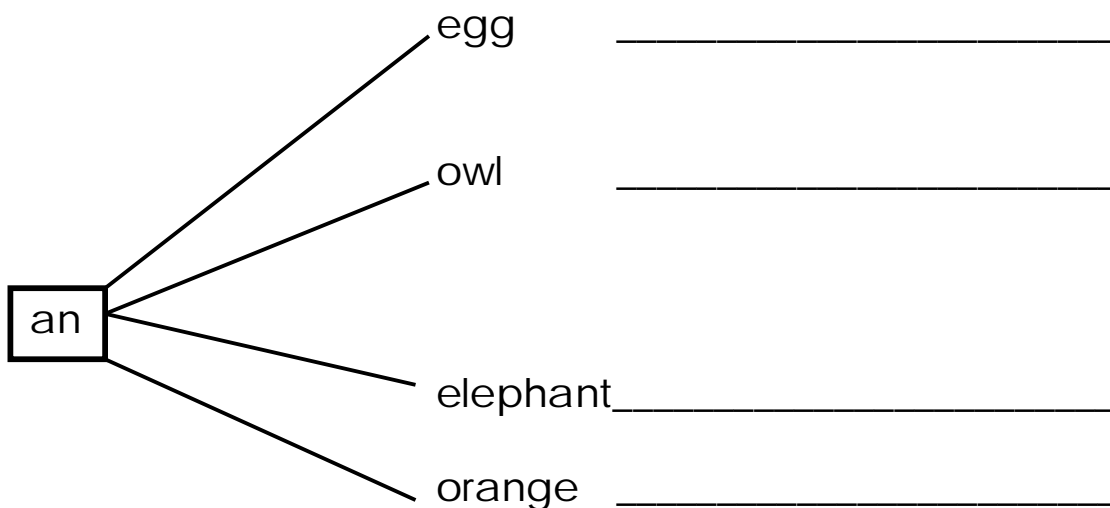
10 _____

0 _____

13. Name the pictures correctly.

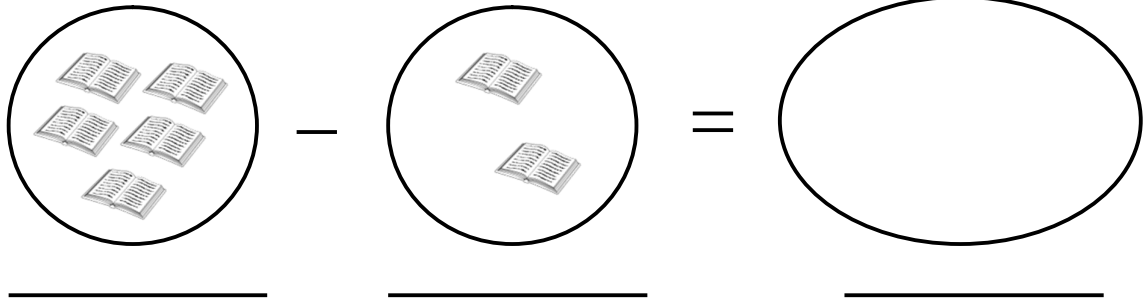
14. Form correct words.



MATHEMATICS

<p>1. Add:</p> <p>a) $\begin{array}{r} 2 \\ + 1 \\ \hline \end{array}$</p> <p>b) $\begin{array}{r} 3 \quad 4 \\ + 2 \quad 1 \\ \hline \end{array}$</p> <p>c) $8 + 2 + 4 = \underline{\hspace{2cm}}$</p>	<p>2. Multiply</p> <p>a) $2 \times 3 = \underline{\hspace{2cm}}$</p> <p>b) $4 \times 2 = \underline{\hspace{2cm}}$</p>								
<p>4. Fill in the missing numbers.</p> <p>a) 0, 1, 2, 3, 4, 5, 6, <u> </u>, <u> </u></p> <p>b) 2, 4, <u> </u>, <u> </u>, 10</p>	<p>3. Circle the smaller number</p> <p>a) 6 or 9</p> <p>b) 2 or 5</p> <p>c) 25 or 5</p>								
<p>6. Draw these shapes</p> <table border="1" style="width: 100%; height: 100px; border-collapse: collapse;"> <tr> <td style="width: 25%;"></td> <td style="width: 25%;"></td> <td style="width: 25%;"></td> <td style="width: 25%;"></td> </tr> <tr> <td style="text-align: center;">cone</td> <td style="text-align: center;">square</td> <td style="text-align: center;">oval</td> <td style="text-align: center;">rectangle</td> </tr> </table>					cone	square	oval	rectangle	<p>5. Which number comes after?</p> <p>a) 43, <u> </u></p> <p>b) 9, <u> </u></p> <p>c) 16, <u> </u></p>
cone	square	oval	rectangle						
<p>7. Write the number symbols.</p> <p>twenty <u> </u></p> <p>nine <u> </u></p> <p>thirteen <u> </u></p> <p>five <u> </u></p>	<p>8. Write the following in full:</p> <p>Wed - Wednesday</p> <p>Sun - <u> </u></p> <p>Mon - <u> </u></p>								

9. Subtract the sets below.



10. Three girls plus two girls equals _____


11. Nine take away six equals to _____

12. 8 Minus 4 equals to _____

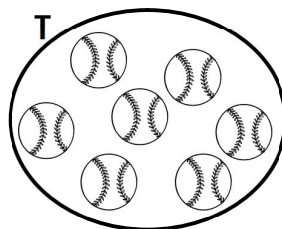
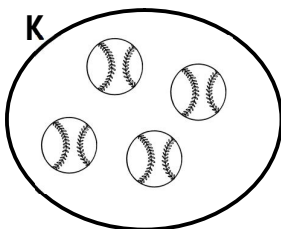
13. Match correctly

eighty	10
six	80
seven	0
ten	17
zero	6

14. Count and write



15. Count the members in the sets.



a) Set **K** has ____ members.

b) Set **T** has ____ members.

16. **Add correctly:**

a) $9 + 4 = \underline{\quad}$

b)
$$\begin{array}{r} 2 \quad 6 \\ + \quad 2 \\ \hline \end{array}$$


c) Five plus three equals to _____

d) Daniel has 2 pencils.
Denis has 7 pencils.

They have _____ pencils altogether.


17. **Tell the time.**

a)



It is _____ o'clock.

b)



It is _____ o'clock.

18. **Draw these sets.**

a) A set of 2 tables.



b) A set of 4 balls.



c) A set of 3 books.



LITERACY 1A

1. Write these words correctly

dgo _____




woc _____

ratibb _____

2. Draw the following parts of the body.

eye	ears	mouth	legs

3. Name the birds below.



4. Underline important places at school.

desk , toilets , chair , kitchen

5. Write any two activities we do at school.

i) _____

ii) _____

6. Tick (✓) the place where we get food from.

church


garden

market

bank

lake

7. Name the tools below.







8. Match correctly

eyes

for chewing

legs

for seeing

mouth

for walking

teeth

for talking

9. Draw things we use to clean the body.

soap	water	tooth brush

10. Who treats our teeth?

(**dentist** , **hair dresser**)

11. Fill in the missing letters correctly.

ch ___ st

ea ___ s

t ___ ___ th

he ___ d

12. Identify the things that give us light.







13. Circle the building materials.

pen , cement , stones , table , nails

14. Write any two common diseases of people.

i) _____

ii) _____

15. Who heads a home?

16. Draw the food we eat.

mango	fish	rice

17. _____ are animals that we keep at home.
(**wild animals** , **domestic animals**)

18. Name any two wild animals

i) _____

ii) _____

19. Give the young ones of these animals.

goat _____

dog _____

SECTION A

1. What is a school?

2. Name two things found at school.

i) _____

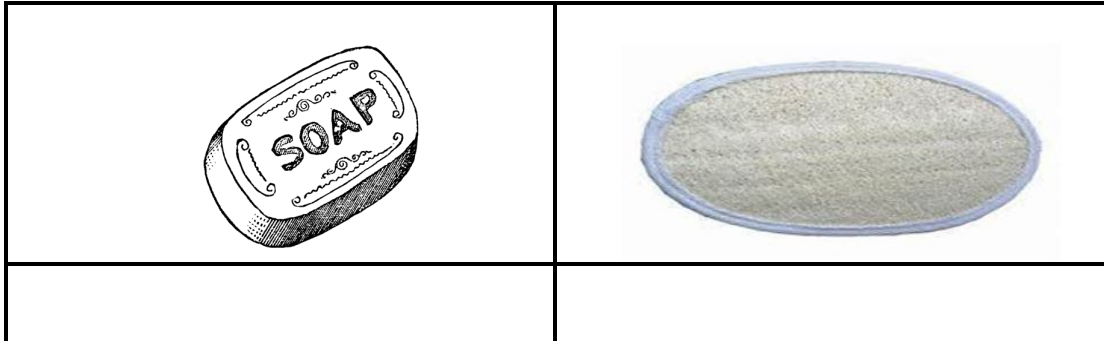
ii) _____

3. Give two animals found at home.

i) _____

ii) _____




4. Name these things we use to clean our bodies.



5. Which domestic animal eats rats?

6. How do you come to school?

7. Draw these things found at home.

		
Chair	Table	Television

8. A group of people related by blood, marriage or adoption is called a _____.

9. Circle two people found in our community.

teacher food doctor

10. Give two examples of work done by children at home.

i) _____

ii) _____

11. Mention the uses of the following things found at school.

a) books for _____

b) chairs for _____

c) brooms for _____

SECTION B

12. Match people to their places of work.

Imam garden

Pilot bank

Farmer air port

Banker mosque

13. Write **true** or **false**.

a) A piglet is a young one of a pig. _____

b) A Cleaner heads a school. _____

c) A lion is a wild animal. _____

d) Doctor treats sick people. _____

14. A _____ is a place where people live or stay.

15. Draw these important places near our school.

church	hospital	mosque

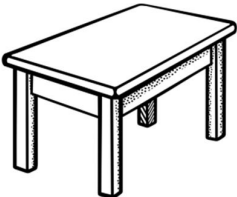
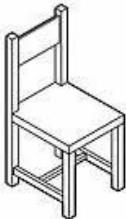

16. a) What are domestic animals?

b) List any two domestic animals.

i) _____

ii) _____

17. Name these things found in a classroom.

18. Circle two buildings found at school.

kitchen , sitting room , classroom

19. Complete correctly.

Animal	Young one
cow	_____
_____	puppy
goat	_____

20. Tick (√) two activities done in our community.

farming

school van

teaching

21. Give any two animals found in the zoo.

i) _____

ii) _____

Listen and write.

1. Sounds
2. Words

Complete the sentences with a correct word.

3. Mary is sitting _____ the chair.
4. He is writing with a _____.
5. I have _____ ears.
6. Tom is going _____ school.

Form words using these syllables.

ma pe

7. _____
8. _____
9. _____
10. _____

Circle the words with the correct spelling.

11. basket , busket , bucket , baket
12. teble , table , tabla , tebe
13. house , houuse , house , hose
14. handi , hadi , hadee , hand

Use the correct word from the brackets to complete.

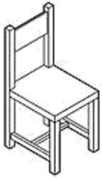
15. Sarah _____ a big bag. (has , have)
16. It is _____ chairs. (an , a)
17. The pupils _____ learning. (is , are)
18. Ali _____ his finger. (cut , cat)

Name the pictures.

19.



20.



21.



Underline the odd word out.

22. pin , tin , pot , fin

23. vest , bag , bed , belt

24. cat , bag , ban , fit

25. pole , doll , bell , pot

Match and write a word.

26. bla

ll _____

27. fi

ss _____

28. tee

ck _____

29. gra

sh _____

30. ba






th _____

Read and draw.

31. The man has a car.	32. She is a fat girl.
33. The hen has four eggs.	34. I can see a house.

Use the words below to complete the story.

basket , mangoes , home , tomatoes , mother

One day,  _____ went to the market. She bought  _____ and  _____. She put them in a  _____ and carried them  _____.

Read the sounds, syllables and words

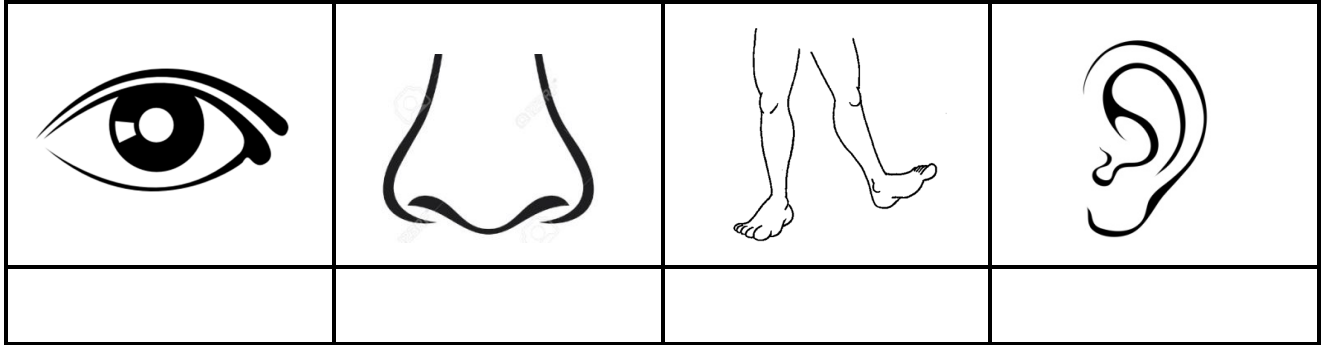
g f h
si ta po
back king vim

RELIGIOUS EDUCATION

15. What is your religious name?

16. Who teaches the word of God in church?

17. Name these parts of the body that God gave us.

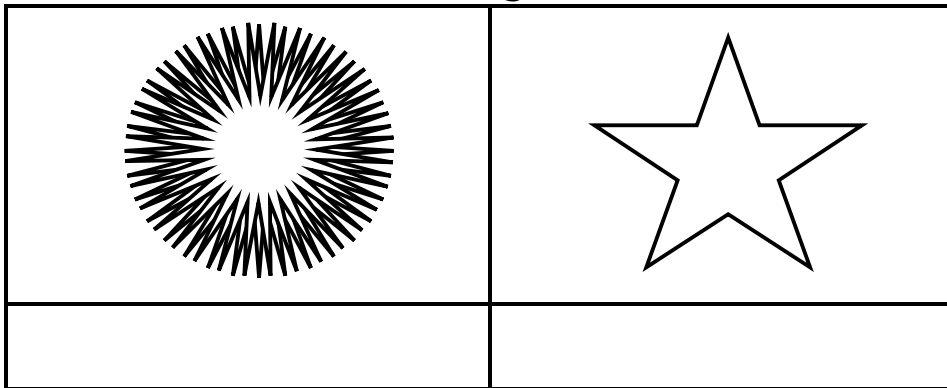


18. _____ means God is with us.

19. Write down any four birds God created.

- i) _____
- ii) _____
- iii) _____
- iv) _____

20. Name these sources of light God created.



21. Who was the mother of Jesus Christ?

22. Give two animals which give us milk.

- i) _____
- ii) _____

23. Match correctly.

teacher

preaches the word of God

priest

types exams


cooks

teaches pupils

secretary

cooks food

24. Name these things we use to clean the body.



25. Tick the things God created.

- man
- books
- tables
- birds
- insects

26. Who is our father in heaven?

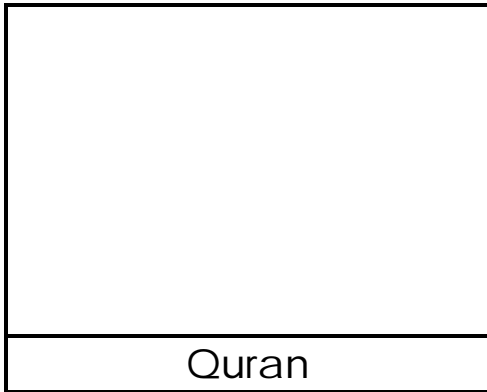
27. Mention any four members of the nuclear family.

- i) _____
- ii) _____
- iii) _____
- iv) _____

28. When do Moslems go for prayers?

29. Who was the first man to be created by God?

30. Draw a Quran.



31. Who died for our sins?

32. Write down two Christian names for;

Boys

i) _____

ii) _____

Girls

i) _____

ii) _____

33. Draw these places of worship.



34. Who was the wife of Adam?

35. A _____ guards our home.

36. Name the Holy book for Christians.

37. God wants us to _____ our neighbours. (love, hate)

38. Match correctly.

nose

feeling

tongue

seeing

skin

hearing

eyes

smelling

ears

tasting

END