

# IVORY INTERNATIONAL SCHOOL

KINDERGARTEN AND PRIMARY MIXED DAY AND BOARDING

BULOBA – MITYANA ROAD

YEAR 2 NEW YORK

COVID-19 LOCKDOWN PACKAGE SET III

ENGLISH

NAME: .....

## SECTION A

### 1. Write the words correctly

a) braze \_\_\_\_\_

b) ckdu \_\_\_\_\_

c) lfca \_\_\_\_\_

### 2. Arrange in alphabetical order.

a) brush , apple, egg, fish

\_\_\_\_\_

b) sister, doctor, gun, broom

\_\_\_\_\_

c) calf, piglet, lamb, goat

\_\_\_\_\_

### 3. Write the plurals of the given words.

a) hoe \_\_\_\_\_

b) fly \_\_\_\_\_

c) sheep \_\_\_\_\_

**4. Fill in is, are or am in the gaps below.**

- a) Peter and Jethro \_\_\_\_\_ my friends.
- b) She \_\_\_\_\_ mopping the classroom
- c) I \_\_\_\_\_ bathing
- d) \_\_\_\_\_ you going for prayers

**5. Write the opposites of the circled words.**


- a) Apio has \_\_\_\_\_ handwriting. (bad)
- b) My brother is very \_\_\_\_\_. (short)
- c) Fatuma has a \_\_\_\_\_ dress. (clean)
- d) The baby is \_\_\_\_\_. (laughing)

**6. Write the words in short.**


- a) School \_\_\_\_\_
- b) Monday \_\_\_\_\_
- c) Street \_\_\_\_\_
- d) January \_\_\_\_\_

**SECTION B**

**7. What is the time?**



It is \_\_\_\_\_ O'clock



It is \_\_\_\_\_ O'clock

**8. Re-write the sentences as instructed in the brackets**

a) John is tall. James is tall. (Use.....and.....)

\_\_\_\_\_


b) rose is a smart girl (punctuate correctly)

\_\_\_\_\_

c) Rona is crying. She is sick. (Use.....because.....)

\_\_\_\_\_

**9. Fill in the gaps with a correct prepositions.**



The stone is \_\_\_\_\_ the house.



The ball is \_\_\_\_\_ table.



The cat is \_\_\_\_\_ the chair.



The pencils are \_\_\_\_\_ the tin.

**10. Use the words in the brackets correctly.**

- a) Arinda \_\_\_\_\_ matoke yesterday. (cook)
- b) He \_\_\_\_\_ us English (teach)
- c) Resty is \_\_\_\_\_ to church. (go)
- d) They will \_\_\_\_\_ a nice lunch. (eat)

**11. Match correctly.**

- |        |      |
|--------|------|
| mother | it   |
| pig    | they |
| people | he   |
| Alex   | she  |

**12. Form small words from the big ones.**

- Fisherman \_\_\_\_\_
- teacher \_\_\_\_\_
- chair \_\_\_\_\_

**13. Re-arrange the sentences to make a correct story.**

- a) He weeds the crops
- b) And lastly he sells the crops
- c) The farmer digs the land
- d) He harvests the crops
- e) He plants the seeds.





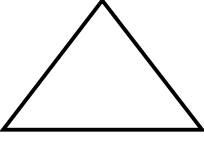
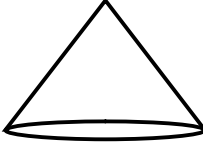

- a. \_\_\_\_\_
- b. \_\_\_\_\_
- c. \_\_\_\_\_
- d. \_\_\_\_\_
- e. \_\_\_\_\_


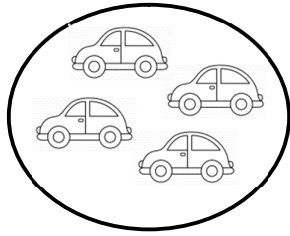
**14. Choose the words given below to complete the story.**

babies, forest, bananas, wild, tails

Monkeys are \_\_\_\_\_ animals. They have legs and long \_\_\_\_\_ . They live in \_\_\_\_\_ because they feed on fruits like mangoes, \_\_\_\_\_ and grapes. Their young ones are called \_\_\_\_\_ .

# MATHEMATICS



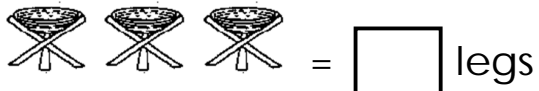
<p>1. Count and write.</p> <p> = _____</p> <p> = _____</p> <p> = _____</p>	<p>2. Draw a set symbol for an empty set</p>       <p>3. Share 10 pencils equally between 2 children.</p> <p>Each child gets _____ pencils</p>
<p>4. Work out:</p> <p><math>2 + 1 =</math></p> <p><math>3 - 0 =</math></p> <p><math>0 \times 5 =</math></p>	<p>5. Write in words.</p> <p>12 _____</p> <p>20 _____</p> <p>80 _____</p> <p>100 _____</p>
<p>6. Name the shapes</p> <div style="display: flex; justify-content: space-around; align-items: flex-start; margin-top: 20px;"> <div style="text-align: center;">  <p>_____</p> </div> <div style="text-align: center;">  <p>_____</p> </div> <div style="text-align: center;">  <p>_____</p> </div> </div>	
<p>7. Name the sets below.</p> <div style="display: flex; align-items: center; margin-top: 20px;"> <div style="text-align: center; margin-right: 20px;">  </div> <div style="border-bottom: 1px solid black; width: 400px;"></div> </div>	





---

---

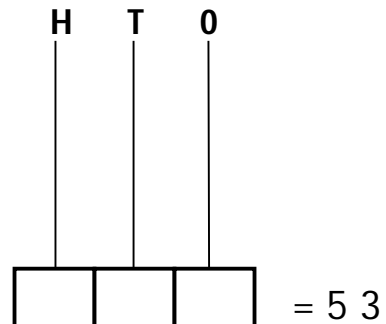
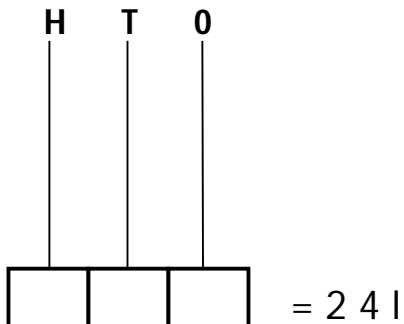
8. Complete correctly




9. Circle 3 groups of 2 objects.







10. Complete the abacus correctly.



11.	<p>49 = _____ tens _____ ones.</p> <p>527 = _____ hundreds _____ tens _____ ones.</p> <p>100 = _____ hundreds _____ tens _____ ones.</p>																									
12.	<p>Work out:</p> <table style="width: 100%; text-align: center;"> <tr> <td>T</td><td>O</td><td>T</td><td>O</td><td></td><td></td> </tr> <tr> <td>4</td><td>2</td><td>4</td><td>2</td><td>1 3 4</td><td>2 0 0</td> </tr> <tr> <td>- 3</td><td>2</td><td>+ 3</td><td>2</td><td>- 1 2</td><td>+ 1 0 0</td> </tr> <tr> <td>_____</td><td>_____</td><td>_____</td><td>_____</td><td>_____</td><td>_____</td> </tr> </table>		T	O	T	O			4	2	4	2	1 3 4	2 0 0	- 3	2	+ 3	2	- 1 2	+ 1 0 0	_____	_____	_____	_____	_____	_____
T	O	T	O																							
4	2	4	2	1 3 4	2 0 0																					
- 3	2	+ 3	2	- 1 2	+ 1 0 0																					
_____	_____	_____	_____	_____	_____																					
13.	<p>Draw tens and ones.</p> <p>15 = </p> <p>24 = _____</p> <p>37 = _____</p>	<p>14. Write the missing numbers</p> <p>90 , 80 , 70 , _____</p> <p>110 , 120 , 130 , _____</p> <p>45 , 50 , 55 , _____</p> <p>100 , 200 , 300 , _____</p>																								
15.	<p>Multiply</p> <table style="margin-left: auto; margin-right: auto;"> <tr> <td></td><td>3</td><td>2</td><td></td> </tr> <tr> <td>x</td><td>2</td><td></td><td></td> </tr> <tr> <td>_____</td><td></td><td></td><td></td> </tr> <tr> <td>_____</td><td></td><td></td><td></td> </tr> </table>			3	2		x	2			_____				_____											
	3	2																								
x	2																									
_____																										
_____																										
	<p>16. Give the place value of the underlined digits.</p> <p>a) <u>4</u> 4 4                      b) 3 <u>0</u> 9</p> <p style="margin-left: 100px;">└───</p> <p style="margin-left: 100px;">└───</p> <p>c) 1 9 <u>6</u></p> <p style="margin-left: 100px;">└───</p>																									



17.

Ann	
Winnie	
Amina	
Susan	

a) How many flowers did Amina pick?

\_\_\_\_\_

b) Who picked three flowers?

\_\_\_\_\_

c) Who picked the biggest number of flowers?

\_\_\_\_\_

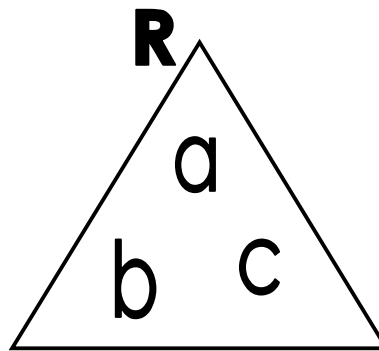
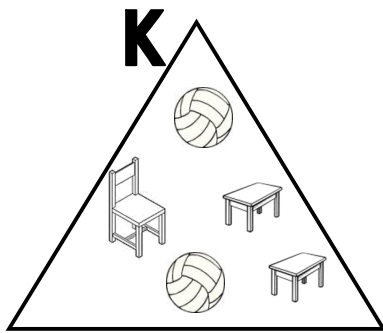
d) How many pupils picked flowers?

\_\_\_\_\_

e) How many flowers did the pupils pick altogether?

\_\_\_\_\_

18. Compare the sets below:



a) How many members are in set K?

\_\_\_\_\_

b) How many members are in set R?

\_\_\_\_\_

c) Which set has least members?

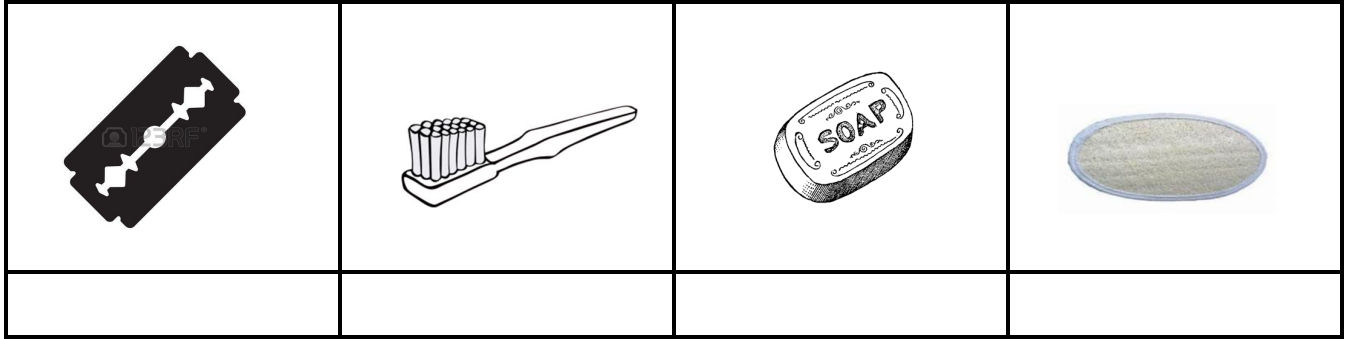
\_\_\_\_\_

d) List the members of set R.

\_\_\_\_\_

## LITERACY 1A

1. Name these things we use to clean our body.



2. Give two reasons why people eat food.

- i) \_\_\_\_\_  
ii) \_\_\_\_\_

3. Write down two places at our home that need to be kept clean.

- i) \_\_\_\_\_  
ii) \_\_\_\_\_

4. Identify any one plant that a year two pupils can eat its fruits.

\_\_\_\_\_

5. Write down one thing found on the child's health card.

\_\_\_\_\_

6. Which sense organ balances the body?

\_\_\_\_\_

7. Outline two examples of milk products.

- i) \_\_\_\_\_  
ii) \_\_\_\_\_

8. How many legs does an insect have?

\_\_\_\_\_

9. Why do we brush our teeth?

\_\_\_\_\_

10. Name two main sources of food.

- i) \_\_\_\_\_  
ii) \_\_\_\_\_


11. Which body sense organ helps pupils to see letters on a white board?

\_\_\_\_\_

12. Write down two common diseases at home.

- i) \_\_\_\_\_  
ii) \_\_\_\_\_


13. Write the use of the garden tools below.



\_\_\_\_\_



\_\_\_\_\_



\_\_\_\_\_



\_\_\_\_\_

14. Name two insects that are useful to insects.

- i) \_\_\_\_\_
- ii) \_\_\_\_\_

15. State two ways of keeping food for so long without getting bad.

- i) \_\_\_\_\_
- ii) \_\_\_\_\_

16. Which energy giving food is got from bees?

\_\_\_\_\_

17. a) Give the meaning of the term **living things**.

\_\_\_\_\_  
\_\_\_\_\_





18. State two signs of poor feeding among children.

- i) \_\_\_\_\_
- ii) \_\_\_\_\_

19. Circle two examples of body building food below.

- i) \_\_\_\_\_
- ii) \_\_\_\_\_

20. Draw these items used to clean our school.

broom	scrubbing brush	rake	slasher
			

21. Write down three examples of wild animals.

i) \_\_\_\_\_

ii) \_\_\_\_\_

iii) \_\_\_\_\_

22. Give two reasons as to why we give first aid.

i) \_\_\_\_\_

ii) \_\_\_\_\_

23. Point out two activities done during dry season.

i) \_\_\_\_\_

ii) \_\_\_\_\_

24. Which member of a family helps to wash utensils?

\_\_\_\_\_

25. Mention any one common accident on the way.

\_\_\_\_\_

**SECTION A**

1. Which domestic animal guards our homes?  
\_\_\_\_\_

2. Apart from ropes, name one other thing we make from banana fibres. \_\_\_\_\_

3. How do we call the young one of a sheep?  
\_\_\_\_\_

4. Give one role of a mother at home.  
\_\_\_\_\_

5. In which season do farmers harvest their crops?  
\_\_\_\_\_

6. Mention any two colours found on the traffic lights.

i) \_\_\_\_\_


ii) \_\_\_\_\_

7. Name any two strong building materials.

i) \_\_\_\_\_

ii) \_\_\_\_\_



8. Draw and name one basic need of people.



\_\_\_\_\_

9. What is the main natural source of light?  
\_\_\_\_\_

10. Name these important places near our school.



11. Underline three school symbols.

School badge

books

school uniform

School pen

school bag

box file

12. Name two things found in the kitchen.

i) \_\_\_\_\_

ii) \_\_\_\_\_

13. Name the animal that gives us pork.

\_\_\_\_\_

14. Aeroplane is to air port as \_\_\_\_\_ is to Bus Park.

### SECTION B

15. a) What is a nuclear family?

\_\_\_\_\_  
\_\_\_\_\_

b) Mention two people found in a clear family.

i) \_\_\_\_\_

ii) \_\_\_\_\_

16. a) Fill in the table correctly.

Type of weather	Element of weather
Windy	_____
Cloudy	_____
_____	sunshine

17. a) What is transport?

\_\_\_\_\_  
\_\_\_\_\_

b) Name any two animals used as means of transport.

i) \_\_\_\_\_

ii) \_\_\_\_\_

18. Answer "true" or "false"

a) The young one of a goat is a lamb. \_\_\_\_\_

b) We come to school to learn. \_\_\_\_\_

c) Food is a basic need of man. \_\_\_\_\_

d) A hut is a permanent house. \_\_\_\_\_

19. Draw and name three things found in a classroom.


20. Match the following correctly.

**Person**

a) Carpenter

b) Imam

c) Barber

d) Doctor

**Duty**


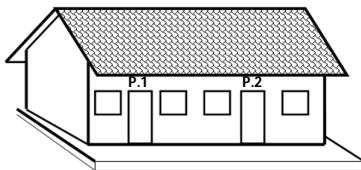

cuts hair

treats sick people

leads prayers in a mosque

makes furniture

21. Name these needs of a school.

22. Why do you put on a school uniform?

---

23. a) What is a community?

---

---

b) Mention two people found in our community.

i) \_\_\_\_\_

ii) \_\_\_\_\_

24. Give any three domestic animals you know.

i) \_\_\_\_\_

ii) \_\_\_\_\_

iii) \_\_\_\_\_

**END**