

IVORY INTERNATIONAL SCHOOL

KINDERGARTEN AND PRIMARY MIXED DAY AND BOARDING
BULOBA – MITYANA ROAD

YEAR 3 NEW DELHI
COVID-19 LOCKDOWN PACKAGE SET III

ENGLISH

NAME:

SECTION A

Arrange the letters to form correct words.

1. ouths _____
2. orthN _____
3. ewst _____
4. lleyva _____

Use the correct form of the word in the brackets to complete the sentences.

5. Sarah is _____ than Suzan. (smart)
6. Our neighbour's baby _____ every night. (cry)
7. Joseph is _____ now. (dance)
8. Mukasa has lost _____ mother. (he)
9. Musa _____ all the food he was given because he was hungry. (eat)
10. Kato and Wasswa _____ twin. (is)

Complete the sentences with a suitable word.

11. _____ is your name?
12. I come to school _____ foot.
13. Jane is eating _____ mango.
14. She is sitting _____ a broken chair.

Arrange the word in alphabetical order.

15. horse , came , lion , ox
- _____

16. woman , boy , girl , man

Give the opposite of the given words.

17. new _____

18. woman _____

19. beautiful _____

20. boy _____

Underline the odd man out.

21. cassava , yam , stone , potatoes

22. lake , river , hill , west , plateau

23. bus , taxi , lorry , aeroplane , bicycle

Write small words from the big ones.

24. small _____

25. carpenter _____

26. classroom _____

Give one word for the underlined group of words.

27. She got married to a person who makes furniture.

28. My uncle is a person who maintains law and order.

29. I saw a young one of a goat crossing the road.

30. Paul destroyed a house of a bird.

Re-arrange the words to form a good sentence.

31. do you go to school where?

32. eating food I am now.

33. grunts a pig.

Write the full form of the following

34. Isn't _____

35. P.O _____

Give the plural form of the underlined words.

36. That man is a shopkeeper.

37. The dog gave birth to a puppy.

38. Where did you put the key?

39. He makes good furniture.

Re-write the sentences as instructed in brackets.

40. Mukasa is writing a letter. It is very short. (Use which)

41. Namaganda is in primary three. Musa is in primary three.
(Use: and)

42. A sheep is a domestic animal. (Begin: Sheep are)

43. Here is the boy. His bag was stolen. (Use: whose)

44. Bbosa was born in Buloba. James was born in Buloba.
(Begin: Both)

45. Here is the man. He works with my father. (Use: who)

46. Opio is very fat. He can run very fast. (Use: but)

47. I ate the food. I was very hungry. (Use: because)

48. I live in Buyala. (Write a question to the statement)

49. I am going to the market today. (Change the sentence to yesterday tense)

50. Fatuma is younger than Joel. (Underline the adjective)

SECTION B

51. A. Match words in group A to B correctly.

A
aunt

princess

wife

niece

queen

B
king

uncle

nephew

husband

prince

B. Construct five correct sentences from the table.

I	like	green mangoes
Joseph`	likes	meat
She	don't like	playing netball
We	doesn't like	travelling
Lay and Ben		reading

a) _____

b) _____

c) _____

d) _____

e) _____

52. Read the passage below and in full sentences answer the questions that follow.

Our community

A community is a group of people living or working together. Examples of communities are home; school, market, church, shop, bank, farm, hospital. Mrs. Namaganda is a farmer. She grows crops and keeps animals. Mr. Opio is a doctor. He treats sick people Mugarura mends shoes. They enjoy their work.

Questions

a) Write the title of the passage.

b) What work does Mrs. Namaganda do?

c) What does a doctor do?

d) Who mends shoes according to the passage.

e) Write down any two examples of communities.

f) Name one group of people who work in hospital apart from doctors.

g) What does Mr. Opio do according to the passage?

h) Write the plural form of the underlined word in the passage.

i) Do you think, these people enjoy their work?

53. A. Re-arrange these sentences to form a good story.

- a) It cried loudly for help.
- b) John hit a stone and got a wound.
- c) His friends took him to the clinic.
- d) John and his friends were playing.
- e) It got better after treatment.

Good story

- a) _____
- b) _____
- c) _____
- d) _____
- e) _____

- B.**
- a) Then she goes to work.
 - b) She prepares breakfast.
 - c) Mummy wakes up at six o'clock in the morning.
 - d) She says her prayers.
 - e) She takes us to school.

Good story

- a) _____
- b) _____
- c) _____
- d) _____
- e) _____

54. Read the poem below and then answer, in full sentences, the questions about it.

God created animals.
Big, small, fat, thin, tall and short.
Found everywhere in the world.
But mainly in national parks and zoo.

When you go there, you will be surprised.
The giraffe is the tallest, rat shortest.
The elephant the fattest, cheetah the fastest.
Lion the toughest, antelope the smallest.

He also created birds.
Ostrich the biggest, hen the smallest.

Eagle and kites eating their friends.
Ducks dirtying the environment always.

Questions

a) Who created animals and birds?

b) Where are animals mainly found?

c) Are domestic animals found in the zoo?

d) Which is the tallest animals?

e) Name the fastest animal.

f) Which is the biggest bird?

g) What do eagles and kites do?

h) What dirties the environment?

i) Which is the toughest animal?

j) How many stanzaz does the poem has?

55. Use the words in the box below to fill the gaps in the composition.

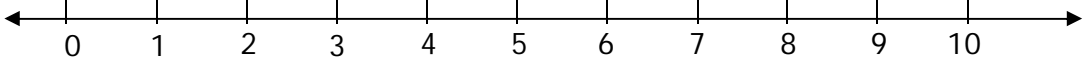
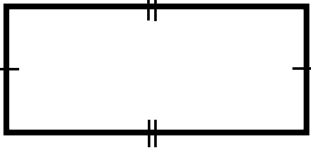
many	done	security	are	other
to	and	easy	important	because



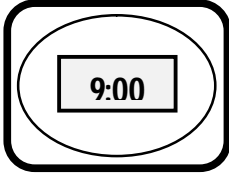
Social services _____ services provided by the government to the people in order _____ live a good life. These services include education, _____, communication, transport, water supply _____ health. All these are _____ by different people like teachers, doctors, drivers and _____.

These services are very _____ in our sub-county _____ they help all the people through good health, living peacefully, _____ movement and so _____ others.

MATHEMATICS

SECTION A

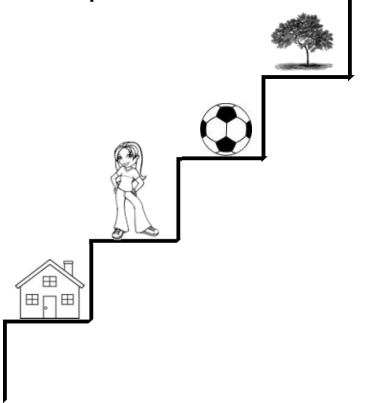
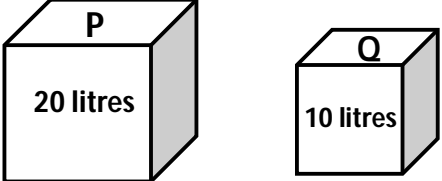
1. Add: $\begin{array}{r} 2 \quad 4 \quad 4 \\ + 3 \quad 4 \quad 4 \\ \hline \\ \hline \end{array}$	2. Expand 832 in place value form.
3. Draw a set of 5 cups.	4. How many days make up 2 weeks?
5. Add 7 + 3 using a number line 	
6. Write the place value of 3 in 7348.	7. Find the missing number in the sequences. 0, 2, 4, _____, 8, _____
8. Write $\frac{2}{3}$ in words.	9. Name the shape below.  _____

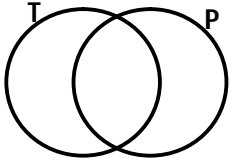
10.	<p>If  = 3 tins, how many tins are represented below?</p> <p></p>			
11.	<p>Find the missing number.</p> <p>5 + <input type="text"/> = 9</p>	12.	<p>Which number comes before?</p> <p>____, 29</p>	
13.	<p>Multiply:</p> $\begin{array}{r} 148 \\ \times 2 \\ \hline \\ \hline \end{array}$		14.	<p>Show 324 on the abacus.</p>
15.	<p>Tell the time.</p> <div style="text-align: center;">  </div> <p>_____</p>		16.	<p>If one chair has 4 legs, how many legs will 5 chairs have?</p>
17.	18.		<p>Find the value of 5 tens.</p>	
<p>Write 9 in Roman numerals.</p>				

<p>19. Set $A = \{a, e, i, o, u\}$ How many members are in set A?</p>	<p>20. How many minutes are in an hour?</p>
--	---

SECTION B

<p>21.</p>	<p>Use the price list below to answer questions.</p> <table border="1" data-bbox="347 646 1078 882" style="margin-left: auto; margin-right: auto;"> <thead> <tr> <th>Item</th> <th>Price</th> </tr> </thead> <tbody> <tr> <td>A cup</td> <td>Sh. 800</td> </tr> <tr> <td>Cooking oil</td> <td>Sh. 1,000</td> </tr> <tr> <td>A pen</td> <td>Sh. 700</td> </tr> <tr> <td>A pencil</td> <td>Sh. 500</td> </tr> </tbody> </table> <p>a) What is the most expensive item? _____ is the most</p> <p>b) What is the cost of a cup?</p> <p>c) What is the cost of a pen and a pencil?</p> <p>d) Find the total cost of all the four items.</p>	Item	Price	A cup	Sh. 800	Cooking oil	Sh. 1,000	A pen	Sh. 700	A pencil	Sh. 500
Item	Price										
A cup	Sh. 800										
Cooking oil	Sh. 1,000										
A pen	Sh. 700										
A pencil	Sh. 500										

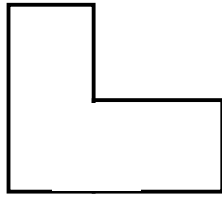
<p>22. Find the place value of the underlined digits in the numerals below.</p> <p>a)</p> <p>i) <u>1</u>076 _____</p> <p>ii) 24<u>4</u>3 _____</p> <p>iii) 3<u>7</u>6 _____</p> <p>b) Find the value of 2 in 6425.</p> <p>c) Which number has been expanded to give $5000 + 500 + 5$?</p>	<p>23. Write in full.</p> <p>a)</p> <p>i) Wed. _____</p> <p>ii) Sept. _____</p> <p>b) If today is Friday, tomorrow will be _____</p> <p>c) How many months make a year?</p>
<p>24. Study the ladder below and answer questions about it.</p>  <p>a) Which object is on third position? _____</p> <p>b) In which position is the girl? _____</p> <p>c) Write the following in words. 4th _____ 1st _____ 2nd _____</p>	<p>25. Study the containers below and answer the questions.</p>  <p>Which container holds more water?</p> <p>How many litres are there in the two containers?</p> <p>How many more litres can container P hold than container Q?</p>

<p>26. Given that; Set T = {b , r , o , a , d} Set P = {c , o , u , r , t}</p> <p>a) Represent the above information on the venn diagram below.</p> <div style="text-align: center;">  </div> <p>b) How many members are in set $T \cap P$?</p> <p>c) List down the members of set $T \cup P$?</p>	<p>27. Find the missing numbers:</p> <p>a) 2 , 4 , 6 , 8 , _____ , _____</p> <p>b) 5, 10 ,15, _____ , _____ , 30, 35, _____</p> <p>c) 800, 700, 600, _____, _____ , 300</p>
	<p>28. Workout:</p> <p>a) $\begin{array}{r} 6 \ 9 \ 5 \text{ litre} \\ - \quad 2 \ 5 \text{ litre} \\ \hline \end{array}$</p> <p>b) $\begin{array}{r} \text{m} \quad \quad \text{cm} \\ 4 \quad \quad 6 \ 8 \\ + 2 \quad \quad 1 \ 2 \\ \hline \\ \hline \end{array}$</p>
<p>c) Benald had 29 goats, 14 of them died. How many goats remained?</p>	<p>28. Fill in the missing numbers.</p> <p>a) $\square \times 4 = 20$</p> <p>b) $6 + \square = 9$</p> <p>c) $\square - 3 = 7$</p> <p>29. Divide 36 by 3.</p> <p>a)</p> <p>b) Write fourteen thousand in figures.</p> <p>c) Find the value of 3 hundred.</p>

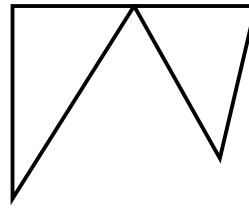
30. How many sides have the shapes below?

a)

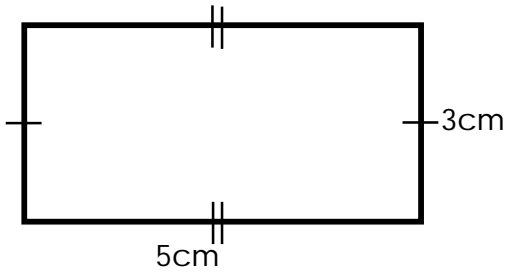
i)



ii)




b) Find the area of the shape below.



31. Fill in the missing numbers.

a) 111 = _____ hundreds _____ tens _____ ones

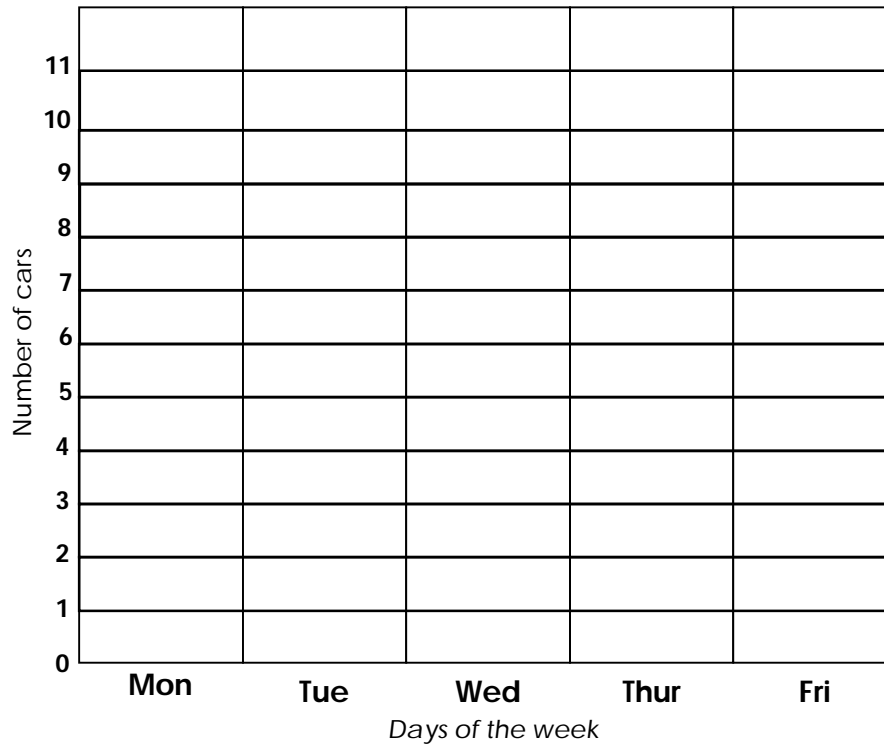
b) 3493 = _____ thousands _____ hundreds _____ tens _____ ones

c)  = _____ tens _____ ones.

32. Jane sat on the roadside. She recorded the number of cars which passed by each day for five days. The results are shown below.

Monday	10 cars
Tuesday	5 cars
Wednesday	9 cars
Thursday	7 cars
Friday	10 cars

Put the above information on the bar graph below.



LITERACY 1A

SECTION A

1. Name the process that leads to the formation of clouds.

2. How is wind able to dry our wet clothes?

3. Why do animals move from one place to another?

4. Which human activity leads to changes in the environment?

5. Why do farmers prefer to plan their crops in wet season?

6. Name the type of cloud that shows fine weather.

7. Mention the wild animal that protects itself using a tail.


8. Write the main natural source of water.

9. State any one item used to harvest water.

10. Which member of the family protects it?

11. Give the body organ used for smelling?

12. Which property of air enables a year three child drink juice using a straw?

13. Of what use is the item below when observing personal hygiene?


14. Name any one organism found in the soil.

15. How is a dustbin important when maintaining sanitation?


16. Write the type of soil used to scrub saucepan.

17. Point out one way of keeping food for so long without getting bad.

18. How is air useful in the soil?

19. How are clouds important in the environment?

20. Draw a shadow of an object below.



21. Mention the part of air that is used in respiration.


22. Write any one vaccine given to infants.

23. Outline any one example of energy giving food.

24. How are domestic animals dangerous to people.

25. Name the flowering plant whose seeds are eaten.

26. Draw and name one item used to manage weather.



27. Which component of soil makes it dark?

28. What name is given to the young one of a cow?

29. Give the meaning of the term germination.

30. Which item can a New Delhi pupil use to clean the nose?

31. Name the type of soil with closely packed particles.

32. Which part of sugarcane do we eat?

33. Mention the sense organ that works with the presence of light.

34. State one way of caring for our teeth.

35. By what process do plant roots absorb water from the soil?

36. Name the place where mosquitoes lay their eggs.

37. Why do people eat food?

38. Why is a fire extinguisher brightly coloured?

39. State any one element of weather?

40. Give any one example of a rare gas.

SECTION B

41. a) What is a **weather station**?

- b) Which weather instrument helps to measure the amount of rainfall received in an area?

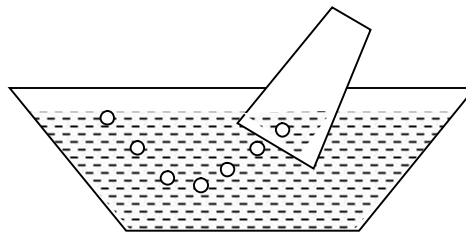
- c) Point out two uses of water at home.
i) _____
ii) _____

42. a) State any two natural changes in the environment.
 i) _____
 ii) _____
- b) Write down one human activity that leads to change in an environment.

- c) Give any one way in which people make water dirty.

43. a) Give the meaning of the term **air**.

b) Name the properties of air below.



c) Why is air called a non-living thing?

44. a) What are **living things**?

- b) Outline two characteristics of living things.
 i) _____
 ii) _____

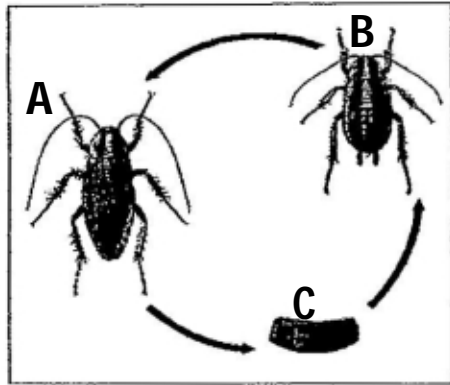
c) Write the group of living things which do not move from one place to another.

45. a) What do you understand by the term **Malnutrition**?

- b) Outline two signs of malnutrition in children.
 i) _____
 ii) _____

c) Mention any one malnutrition disease among children.

46. Use the diagram about a life cycle of an insect and answer questions that follow.



a) Name the stages of growth marked.

A _____

B _____

b) Which insect has the above life cycle?

47. Write the use of the following body parts.

Eyes _____

nose _____

legs _____

tongue _____

48. a) Give the meaning of the term **accident**.

c) Mention one common accident at home.

d) What is the cause of accidents at school?

e) How do you call the container where things used to give first aid are kept?


49. Match the following plants to the parts we eat.

Plant	Part eaten
Onions	leaves
Sweet potatoes	fruit
Banana	roots
Cabbage	stem

i) Onions _____

- ii) Sweet potatoes _____
- iii) Banana _____
- iv) Cabbage _____

50. Use the diagram to answer questions that follow.



- a) What does the above experiment show?

- b) Which process takes place at part marks **A**?

- c) What does a bottle with cold water represent?

- d) Why are some charcoal stoves made out of clay?

51. a) What are **non-living things**?

- b) Write down three examples of non-living things.
- i) _____
 - ii) _____
 - iii) _____

52. a) What is **soil**?

- b) State two types of soil layers.
- i) _____
 - ii) _____
- c) Name the type of soil best for growing of crops.

53. a) What is a **shadow**?

b) Outline two uses of shadow.

i) _____

ii) _____

c) Why is a moon not called a natural source of light?

54. a) How do you call the animals kept at home?

b) Mention two products got from animals.

i) _____

ii) _____

c) How does a housefly move?

55. a) Write down two places at home that need to be kept clean.

i) _____

ii) _____

b) Mention two common diseases at home.

i) _____

ii) _____

LITERACY 1B

SECTION A

1. What name is given to the representation of an object as seen from above?

2. Give one importance of a cow at home.

3. Mention any one cardinal point of a compass.

4. Give one example of basic needs of man.

5. In which type of family do we find relatives, parents, and biological children?

6. Draw a map of a tree in the space provided below.



7. Why should people go to hospitals?

8. Write down the motto of your school.

9. Give one example of physical features found in our sub-county.

10. What is weather?

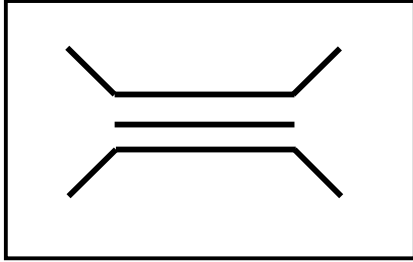
11. Mention one crop grown in swamps.

12. In which season do farmers plant their seeds?

13. What is the main duty of the police?

14. Write K.C.C.A in full.

15. Name the symbol below.



16. Name the bird found in the middle of Uganda flag.

17. What is the capital city of Uganda?

18. In which sub-county is your school found?

19. Mention any one important place in your school.

20. Identify the biggest hospital in Uganda.

21. How many members make up a local council one executive committee?

22. Which clouds give rainfall to farmers?

23. Identify one means of water transport.

24. What is a valley?

25. Write down one group of people who use a compass direction in their daily life.

26. Why do we use symbols on a map?

27. What name is given to the mother of twins in Buganda?

28. Write one main colour of your school.

29. Name the largest ethnic group in Uganda?

30. Which lake gives us salt in Uganda?

31. Give any one product obtained from clay soil.

32. Mention any one artificial source of water in our community.

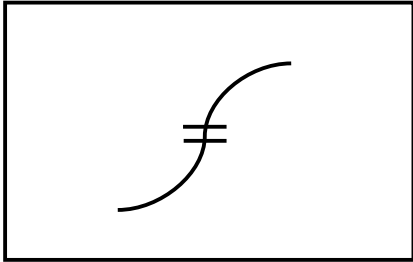
33. Give one reason why farmers grow crops.

34. How are lakes and rivers useful to people in our community?

35. Name any one security weapon used for keeping peace in the community.

36. What title is given to the person who heads a school?

37. Name the map symbol below.



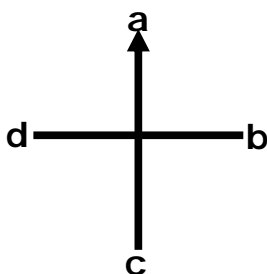
38. Tell anyone example of a wild animal.

39. What is a homestead?

40. Who was the first Muganda?


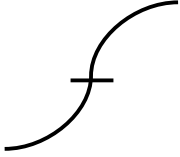
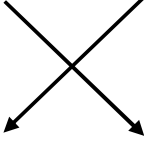
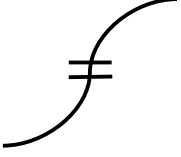
SECTION B

41. Write down four elements of a good map.
i) _____
ii) _____
iii) _____
iv) _____
42. Name the given points of a compass direction below.



- a _____
b _____
c _____
d _____

43. Name the map symbols below.

44. a) What are physical features?

b) Write down any three examples of physical features.

- i) _____
- ii) _____
- iii) _____

45. a) Write down the colours of Uganda flag in their order.

- i) _____
- ii) _____
- iii) _____

46. Write down any four important places in our sub county.

- i) _____
- ii) _____
- iii) _____
- iv) _____

47. a) Give a reason why children go to school.

b) State two reasons why school children wear school uniform.

- i) _____
- ii) _____

48. a) What is communication?

b) Write down any two modern means of communication used by people in our community.

- i) _____
- ii) _____

c) Identify any one modern means of communicating to school children.

49. a) Who is a leader?

b) Mention any two qualities of a good leader.

i) _____

ii) _____

c) Mention any one example of a leader at school.

50. a) Name one type of weather.

b) Write down any three elements of weather.

i) _____

ii) _____

iii) _____

51. a) What is transport?

b) Write down any three types of transport used in our sub-county.

i) _____

ii) _____

iii) _____

52. Which language is spoken by the following tribes?

a) Baganda _____

b) Banyoro _____

c) Acholi _____

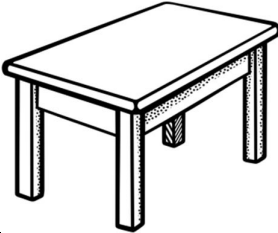

d) Basoga _____

53. a) List down any two items made from timber (wood)?

i) _____

ii) _____

54. a) Draw a map of each given picture.

Picture	Map
	
	

b) What is a picture?

c) How a map similar to a picture?

55. Match the people to their roles.

A

School bursar
Teacher
Doctor
School cook

B

cooks meals at school.
cares for sick people (patients).
collects school fees.
teaches learners at school.

i) School bursar _____

ii) Teacher _____

iii) Doctor _____

iv) School cook _____

SECTION A

1. Give the meaning of the term **family**.

2. How many times are Moslems supposed to pray in a day?

3. Which creature did God make on the 6th day?

4. What marked the beginning of the Holy Communion in Christians?

5. Mention any one prophet in Islam.

6. How do you call the leader in Islam who calls for the prayers?

7. Point out the holy book for Moslems.

8. Which sacrament makes one join God's family?

9. Give one way a Moslem can care for other people.

10. Name the mountain where Noah's Ark rested.

11. Which messenger preached about the coming of the messiah?

12. According to Christianity, what marks the beginning of lent period?

13. Mention any Christian name for boys.

14. Which part of the body helps a Christian to hear the word of God?

15. Give the meaning of the term **personal hygiene**.

16. Give any one gift of the Holy Spirit.

17. Draw and name four things below Allah created.

SECTION B

18. a) Point out two natural sources of light God created.

i) _____

ii) _____

b) Why is a moon not called a natural source of light?

c) Mention one man-made source of light.

19. Outline four prophets in Christianity you know.

i) _____

ii) _____

iii) _____

iv) _____

20. a) Write down two miracles Jesus performed in Cana.

i) _____

ii) _____

b) Give two good behaviour we can we can learn from Jesus.

i) _____

ii) _____

21. a) What is a prayer?

b) Name any two types of prayers you know.

i) _____

ii) _____

c) Why do people pray?

22. a) Outline any two things found in the mosque.

i) _____


ii) _____

b) Write down two ways a Moslem can show respect to others.

i) _____

ii) _____

23. a) Name these things God created.



b) Mention one example of a bird in our environment.

24. a) What is Palm Sunday?

b) Write down one thing Jesus performed during the last supper.

c) Who buried Jesus Christ?

d) Why did Jesus accept to die on the cross?

25. a) Outline two things that bring joy to people.

i) _____

ii) _____

b) What should a good Christian do for the joyful moments?

c) State one situation that brings sorrow to people.

26. a) In which river was Jesus Christ baptised?

b) Mention two ways in which the devil tempted Jesus in the desert.

i) _____

ii) _____

c) Why do Christians fast?

27. a) Who was the first wife of Prophet Mohammad?

b) Why is Mohammad called a good leader in Islam?

c) Name two things that Moslems can do to make God happy.

i) _____

ii) _____

28. a) Match the following animals God created to their young ones.

Animals

Young ones

Goat

lamb

Monkey

cub

Lion

baby

Sheep

kid

Goat

Monkey

Lion

Sheep

END