

IVORY INTERNATIONAL SCHOOL

KINDERGARTEN AND PRIMARY MIXED DAY AND BOARDING

BULOBA – MITYANA ROAD

YEAR 5 JOHANNESBURG

COVID-19 LOCKDOWN PACKAGE SET III

ENGLISH

NAME:

SECTION A I

In questions 1-5, rearrange the letters to make correct words.

1. xita
2. oolsch
3. rdca
4. adlo
5. airch

In questions 6 – 10, use the correct form of the word in bracket to complete the sentence.

6. Patrick a new phone yesterday. (buy)
7. That was the pupil in our class. (good)
8. Bongo did his homework by (he)
9. Joseph walks to school on foot. (usual)
10. That bitch gave birth to four (puppy)

In question 11 – 15, use the most suitable word to fill the blank spaces.

11. A kid is to a goat as a is to a lion.
12. Joseph listening to the news to dancing.
13. The pupils were happy when they saw elephant.
14. Pelina ran faster her friend in the race.
15. My shoe is as black as

In questions 16 – 18, arrange the words to make meaningful sentences.

16. old is your How brother?
.....

17. school going is she to.

.....

18. is our This home new.

.....

In questions 19 – 20, use the words below to make meaningful sentences to show that you know the difference in their meanings.

19. fast

.....

20. first

.....

In each of the questions 21 – 23, write the given abbreviations in their full forms.

21. Feb

.....

22. They're

.....

23. a.k.a

.....

For each of the questions 24 – 25, write the plural of the words given.

24. ceremony

.....

25. ox

.....

For each of the questions 26 – 28, arrange the words given in alphabetical order.

26. rest , rat , run , rib

.....

27. mug , giraffe , path , comb

.....

28. Monday , Friday , Saturday , Wednesday

.....

For each of the questions 29 – 30, rewrite the sentence giving the opposite of the underlined word.

29. The old fox ran slowly after eating a piece of cheese.

.....

30. The passenger's departure was delayed at the airport.

.....

For each of the questions 31 – 33, rewrite the sentence giving one word for the underlined group of words.

31. I bought this meat from the shop which sells meat.

-
32. The dog's house is still being constructed.
-
33. The man who repairs vehicles has just gone home.
-

For each of the questions 34 – 35, circle the odd man out.

34. December , Monday , January , May
-
35. duster , books , pens , plate
-

SECTION A II

In each of the questions 36 – 50, rewrite the sentences as instructed in brackets.

36. Pogba comes from France. Tarian comes from France.
(Rewrite beginning: Both and.....)
-
-
37. John is strong. Thomas is strong.
(Rewrite the sentence using: as as)
-
-
38. Immediately I handed in my passport, my phone rang.
(Begin: As soon as)
-
-
39. Musa likes eating beans with cassava.
(Rewrite the sentence using: enjoys.....)
-
-
40. She likes singing more than studying. (Use: prefer)
-
-
41. Robinho is very old. She cannot walk by himself.
(Rewrite the sentence using: so that)
-
-

42. There wasn't any beggar in the city.
 (Rewrote the sentences using: some)

43. Our head teacher is short. Our director is also short.
 (Rewrite beginning: Either or)

44. I saw the old woman. Her clothes were burnt yesterday.
 (Join the two sentences using whose)

45. Alexis is fat. Lukaku is fatter.
 (Rewrite the sentence using: than)

46. It is bad to ride in the dark. (Begin: Riding)

47. Simon's father is very tall. (Begin: What!)

48. My uncle bought a hammer. He wanted to drive in nails.
 (Rewrite the sentence using:in order to)

49. All flying insects have wings. (Begin: Every)

50. An early bird (Complete the proverb)

SECTION B

51. The table shows the number of children that attended school in Okude Primary School. Study it and use it to answer the questions that follow in full sentences.

Days	Mon	Tue	Wed	Thur	Fri
Number of pupils	50	65	58	73	58

Questions

a) What is the table showing?

.....
.....

b) For which school is the above attendance?

.....
.....

c) How many pupils were recorded on Monday?

.....
.....

d) On which two days was the same number recorded?

.....
.....

e) Which day had seventy three pupils?

.....
.....

f) On which day was the highest number recorded?

.....
.....

g) How many children attended on Monday and Friday altogether?

.....
.....

h) Write in full

a. Wed

b. Thur

i) Which day had the least number of children recorded?

.....
.....

52. Below is a conversation between a teacher and Zeridah. Zeridah came to school late and the teacher questioned her. Fill in what you think Zeridah replied correctly.

Teacher: Good morning Zeridah.

Zeridah:

Teacher: How are you today?

Zeridah:

Teacher: What makes you late today?

Zeridah:

Teacher: You were not feeling? Did you inform your parents?

Zeridah:

Teacher: If yes that is good. Did they take you to hospital or give you some tablets?

Zeridah:

Teacher: Fine if they gave some tablets. Do they know what you are suffering from?

Zeridah:

Teacher: You don't know! Then that is wrong. Tell them to take you for testing first. Will you tell them?

Zeridah:

Teacher: That is good if you will. Now go back home and let your parents take you to hospital. You will come back when you get better, ok?

Zeridah:

Teacher: Ok, please. I wish you quick recovery.

Zeridah:

Teacher: Bye, see you.

Zeridah:

53. Read the poem below and in full sentences, answer the questions that follow about it.

Shopping! Shopping! Shopping!
You are a friend to everyone in the world,
No one lives without you,
You make us get what we don't have,
You are a savior to all homes.

Shopping! Shopping! Shopping!
You are carried out everywhere,
In towns and in villages,
At the market and even shops,
What a saviour you are!

Shopping! Shopping! Shopping!
One makes a shopping list,
Showing the items and their prices one wants to buy,
Making it easy for one to total the costs,
After listing all the items and their prices,
You are wonderful. *Josephine .I*

Questions

a) What is the poem about?

.....
.....

b) Who is a friend to everyone in the world?

.....
.....

c) Where is shopping carried out?

.....
.....

d) What does the shopping list show?

.....
.....

e) How many lines are in stanza three?

.....
.....

f) Who is the writer of this poem?

.....
.....

g) Can anyone live without shopping?

.....
.....

h) Mention any two places where shopping is done.

.....
.....
i) Suggest a suitable title to this poem.
.....
.....

54. The stories below are in wrong order. Rearrange them to make correct stories.

A

1. Shopping day was the most interesting day I enjoyed of all the activities.
2. It was really fun for us the children.
3. Last term, we had very many interesting activities at school.
4. Some of them included swimming, debate, casual day, careers day and shopping day.
5. This is because we bought very many things and ate them all.

Good story

1.
2.
3.
4.
5.

B

1. They included football, netball, volleyball and many others.
2. At our school, we have very many games.
3. Netball is my best game because it is trained by a male teacher.
4. So, he handles the children during the game like he handles us in class.
5. And that male teacher is our class teacher.

Good story

1.
2.
3.
4.
5.

55. Use the words in the box to fill the blank spaces to complete the guided composition.

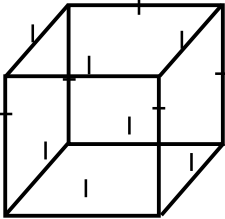
One bright Monday, our teacher of science taught us about He said, "Soil erosion is the away of fertile soil by its agents." He told us that there are types of soil erosion and they are; rill, gully and He also told us that soil erosion can be by poor farming methods, over grazing among others.

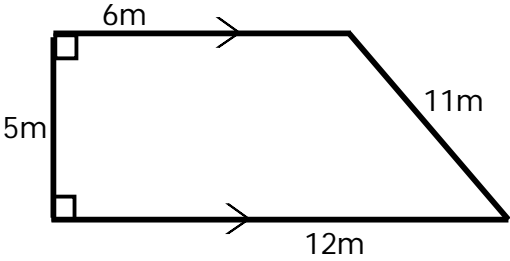
He added that the of soil erosion include; running water, wind, and man to mention but a few. "However, soil erosion can be by crop rotation,terracing and contour ploughing," he said.

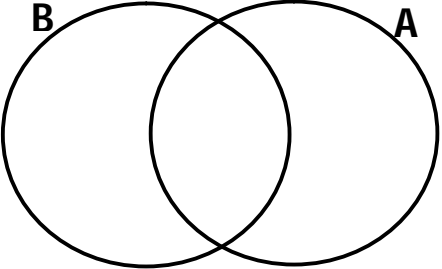
animals , caused , mulching , afternoon , agents ,
soil erosion, washing , controlled, three sheet

MATHEMATICS

SECTION A

1.	Work out: $16 + 42$	2.	What name is given to the figure below?  _____
3.	Draw tallies to represent seven.	4.	What is the value of 4 in 402?
5.	Change 0.8 to a common simplified fraction	6.	James bought XVII books from the shop. Write Jane's number of books in Hindu Arabic.
7.	Reduce $\frac{9}{12}$ to its simplest form.	8.	In the space below, draw a cone.
9.	List down the first 7 counting numbers.	10.	Write 9740 in words.

<p>11. Share 64 apples equally among 16 pupils.</p>	<p>12. Change $3\frac{2}{5}$ to improper fraction.</p>
<p>13. The length of a rectangle is 9cm and its width is 7cm. Find its area.</p>	<p>14. Arrange 3,5,0,1,9 and 12 in ascending order.</p>
<p>15. Find the distance around the shape.</p> 	<p>16. Add: $3\frac{2}{7} + 1\frac{3}{7}$</p>

<p>17. Complete the sequence below. 6, 12, 18, _____ , _____</p>	<p>18. Write in short. $(4 \times 1000) + (8 \times 100) + (2 \times 10) + (5 \times 1)$</p>
<p>19. Shade A only.</p>  <p>A Venn diagram consisting of two overlapping circles. The left circle is labeled 'B' and the right circle is labeled 'A'. The circles overlap in the center.</p>	<p>20. What is $\frac{1}{4}$ of 12?</p>

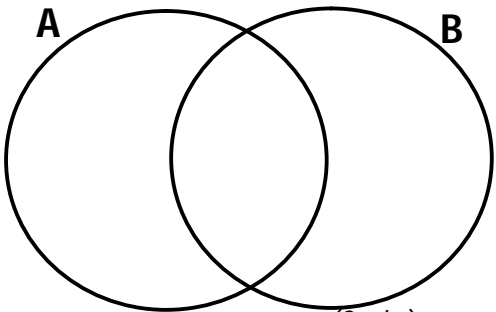
SECTION B

21. Set **A**={4,5,6,7,8,9,10} and Set **B**={counting numbers 1 – 7}

a) List down all elements of set B. (2mks)

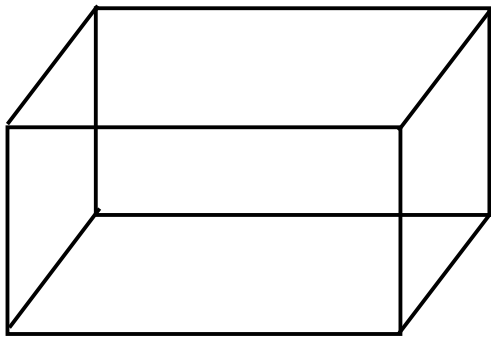
b) Find $n(A \cap B)$ (2mks)

c) Represent the elements of Set **A** and **B** on a Venn diagram below.



(2mks)

22. Use the figure below to answer the questions below.



a) Name the figure (1mk)

b) Find its number of; (1mk@)

i) edges _____

ii) faces _____

iii) vertices _____

23. The table below shows colours of different shirts in a shop. Complete it correctly. (6mks)

Colour	No. of shirts	Tallies
White	5	###
Black	6	_____
Yellow	_____	### III
Red	3	_____
Green	_____	### ### IIII
TOTAL	_____	_____

<p>24.</p> <p>a)</p> <p>i) $\frac{5}{6}$ _____ $\frac{1}{6}$</p> <p>ii) $\frac{4}{7}$ _____ $\frac{7}{9}$</p> <p>b)</p> <p>c)</p>	<p>Use < ,> or = to compare the following fractions. (1mk@)</p> <p>Find the next equivalent fraction of $\frac{4}{5}$ (1mk)</p> <p>Express $\frac{19}{3}$ as a mixed fraction. (2mks)</p>	<p>25.</p> <p>a)</p> <p>b)</p> <p>i)</p> <p>ii)</p>	<p>Simplify: $2r + 3r + 4r$ (2mks)</p> <p>Given that a=4, b=5 and c=3, find the value of;</p> <p>$a + b + c$ (1mk)</p> <p>$a \times b \times c$ (2mks)</p>
<p>26.</p> <p>a)</p> <p>b)</p> <p>c)</p>	<p>Expand 4395 using value. (2mks)</p> <p>Round off 4395 to the nearest hundreds. (2mks)</p> <p>Write 29 in Roman numerals. (2mks)</p>	<p>27.</p> <p>a)</p> <p>b)</p>	<p>Write 433_{five} in words. (2mks)</p> <p>Change 123_{four} to base ten. (2mks)</p>

28.

a)

Workout:

$$\begin{array}{r} 2 \quad 6 \quad 3 \\ \times \quad \quad 5 \\ \hline \\ \hline \end{array} \quad (2mks)$$

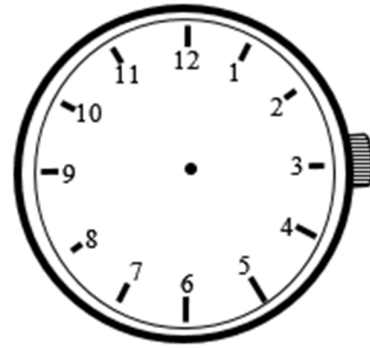
b)

Divide: $\begin{array}{r} \\ 2 \overline{) 724} \end{array}$ (2mks)

29.

a)

Show a quarter past 5 o'clock face below.



b)

Add:	Wks	Days
	2	1
+	3	5
	<hr/>	
	<hr/>	

(1mk)

c)



Change 3 hours to minutes. (2mks)

30.

a)

Given that  represents 24 trees.

How many trees are represented by  ? (2mks)

b) If  represents 4 books, how many books are represented by  ? (2mks)

31. Jackline bought the following items.

A kg of rice sh. 3,000

A bar of soap sh. 2,000

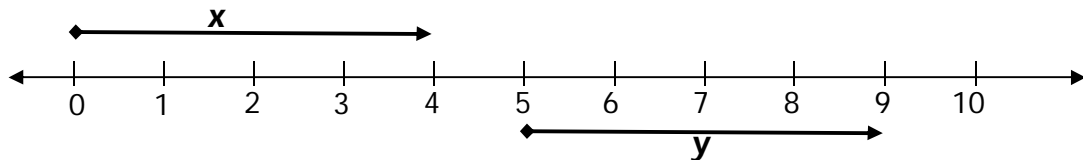
A kig of salt sh. 1,500

a) How much will Jackline pay for 3kg of rice? (2mks)

b) Find the cost of 2 bars of soap. (2mks)

c) If Sarah bought 2kg of salt and one kilogram of rice, how much did she pay? (2mks)

32. Use the numberline below to give the value of the unknowns.




a) i) x _____ ii) Y _____ (1mk@)

b) Workout $+4 + +5$ (2mks)

SCIENCE


SECTION A

1. Mention any one cause of sickness at home.
.....
2. Give the meaning of the term "**Subsistence farming**".
.....
3. Where in man does digestion of food begin?
.....
4. State any one reason as to why a rat is called a living thing.
.....
5. In the space provided below, draw a garden tool used for transplanting seedlings.



6. Why do you clean your hands with clean water and soap after visiting a pit latrine or toilets?
.....
7. State a reason why feathers float on water.
.....
8. How does a hen control Kwashiorkor in a home?
.....
9. Mention any one example of a dicotyledonous seed.
.....
10. Which part of a sugarcane plant stores food?
.....
11. Name any one example of a flowering plant.
.....
12. How do we call a structure where farmers keep their harvested crops?
.....
13. Write any one example of a body organ.
.....

14. Name the type of leaf shown below.



.....
15. Why is a pregnant woman given TT vaccine?
.....

16. In which state of matter is a maize grain?
.....


17. Name the hardest part of a human tooth.
.....

18. Give one reason why poultry farmers prefer rearing local chicken to exotic ones.
.....

19. Mention any one immunisable disease.
.....

20. What is an apiary?
.....

Below is a garden tool. Use it to answer the questions that follow.



21. Name the garden tool shown.
.....

22. How useful is the garden tool to a crop farmer?
.....

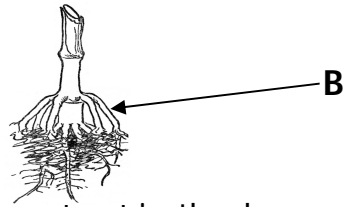
23. Name the farming method that controls pests.
.....

24. How does a cow protect itself from danger?
.....

25. Name the type of clouds which is a clear sign of rainfall.

26. Which disease in rabbits has a sign of ears dropping down?

27. Name the type of roots shown below.



-
28. How is a kidney important in the human body?

29. Suggest any one difference between plants and animals.

30. State the use of a dustbin in a classroom.

31. Give any one activity that promotes sanitation at home.

32. Name the intestinal worm that enters the body through eating half-cooked meat?

33. Name any one cause of pneumonia.

34. Why is carbon dioxide commonly used on fire extinguishers?

35. State the danger of eating too many sweets.

36. Give any one way of caring for your ear.

37. How do you use heat in your daily life?

38. What is **culling** in poultry management?

-
39. Which insect vector spreads malaria?

40. Give a reason why you cut your finger nails short.

SECTION B

41. a) What is germination?

.....
.....

b) Name one part of part of a seed where food is stored.

.....
.....

c) State the use of root hairs to a plant.

.....
.....

d) What will happen to a seed when put in too much water?

.....
.....

42. a) What is immunity?

.....
.....

b) Which type of immunity can a child acquire in each of the following ways?


i) Immunisation

ii) breast feeding

c) Why are children said to be a vulnerable group of people?

.....
.....

43. Study the diagram below and answer the questions that follow.



a) Name the layer marked **Y**.

.....
.....

b) What name is given to the vertical arrangement of soil layers?

.....
.....

c) Name any two types of soil.

i)

ii)

44. a) Mention any one type of digestion.

.....
.....

b) State the use of saliva during food digestion.

.....
.....

d) Give one way, the ileum is adapted to its function.

.....
.....

e) Name any one disease of the digestive system.

.....

45. Match the organism in **A** with its effect in **B**.

A

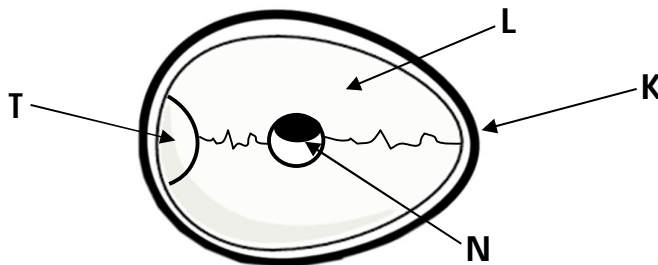
- a) Cockroach
- b) Housefly
- c) Blackfly
- d) Tick

B

- typhus fever
- food poisoning
- trachoma
- river blindness

- a) Cockroach
- b) Housefly
- c) Black fly
- d) Tick

46. The diagram below shows a bird's egg. Use it to answer the questions that follow.



a) Name part marked **T**.

.....

b) State the mineral salt needed to improve the quality of part **K**.

.....

c) Give the function of the part labelled **N**.

.....

d) Why would an egg fail to hatch after the incubation period of 21 days?

.....

47. a) What is apiculture?

.....

.....

b) Name the duty of a queen bee.

.....

c) Why is a drone be not commonly found in the hive?

.....

d) Name the type of bees that make a buzzing sound.

.....

48. a) What are annual crops?

.....

.....

b) Mention any two examples of annual crops.

i)

ii)

c) Identify any one crop growing practice on a crop farm.

.....

49. a) What is poultry?

.....

.....

b) State the difference between poultry and poultry keeping.

.....

.....

c) Which type of poultry is kept for;

i) egg production

ii) chicken/meat

50. a) Which term is used to mean the introduction of vaccines into the body to cause it produce antibodies against germs?

.....

b) Identify any two vaccines given to children for protection against infant killer diseases.

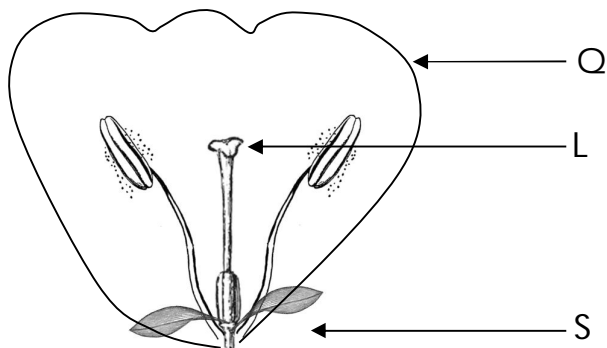
i)

ii)

c) How is polio vaccine administered?

.....

51. Use the diagram below to answer the given questions.



a) Name the parts marked;

- i) Q
- ii) L
- iii) S

b) Give any one type of pollination.

.....

52. a) What is hygiene?

.....

b) State the difference between sanitation and personal hygiene.

.....

c) Write any two steps taken when promoting personal hygiene.

- i)
- ii)

53. a) Identify any one set of teeth in human beings.

.....

b) How important are the following types of teeth to man?

- i) canines
- ii) incisors
- iii) molars

54. a) What are pests?

.....

b) Name any two examples of crop garden pests.

- i)
- ii)

d) Why do farmers carry out mulching?

.....

55. a) In four sentences, write down the steps taken when preparing local

ORS

- i)
- ii)
- iii)
- iv)


SOCIAL STUDIES

SECTION A

1. Name one element of a good map.

.....

2. In the space below, draw a symbol of a bridge.



3. What name is always given to the line of latitude marked 0°.

.....

4. Name the country that neighbours Uganda from the south west.

.....

5. Why is Uganda called a land locked country?

.....

6. Mention any one physical feature found in Uganda.

.....

7. What is the use of a key on a map?

.....

8. Why do people of Kapchorwa district use donkeys for transport?

.....

9. Give one importance of lakes to people.

.....

10. What name is given to the steep sides of the rift valley?

.....

11. Identify the lake which is shared by Uganda, Kenya and Tanzania.

.....

12. Which vegetation zone covers the largest part of Uganda?
.....
13. What is deforestation?
.....
.....
14. Name the largest natural forest in Uganda.
.....
15. Identify the national game park found in the north eastern part of Uganda.
.....
16. What type of wood is got from natural forests?
.....
17. Give one role of a child in a family.
.....
18. Write down one right of a child.
.....
19. Name the type of family where we find mother, father and their biological children in a family.
.....
20. Give one way how children rights are abused in Uganda today.
.....
21. What is the importance of a market to the people in the community?
.....
22. Write RDC in full.
.....
23. Mention the major role played by the Uganda police force.
.....
24. Who is responsible for the children's affairs in the Local council one committee?
.....

25. What title is given to the cultural leader of Buganda Kingdom?
.....
26. What does the term of **climate** mean?
.....
27. Name the element of weather which enables farmers to plant their crops.
.....
28. Identify the type of rainfall received around lakes and rivers.
.....
29. Who was the first European explorer to find the source of River Nile from its mouth?
.....
30. Mention any one group of people who use a compass as their Key instrument?
.....
31. Which type of climate is described as hot and wet throughout the year?
.....
32. Which type of leader is a priest?
.....
33. Name the item that shows activities done in the classroom.
.....
34. Which water body joins Lake Edward and Lake George?
.....
35. Write down any one Island district in Uganda.
.....
36. Of what importance are banks to people?
.....
37. State any one use of electricity to people.
.....
38. Give any one local material for making ropes.
.....

39. Why is mountain Rwenzori snow capped throughout the year?

.....

40. Katende was standing while facing in East direction. If he turned 90° clockwise, what was his new direction?

.....

SECTION B (60 Marks)

41. a) Give the main use of a compass direction to a map reader.

.....

b) What is the opposite direction of south – East?

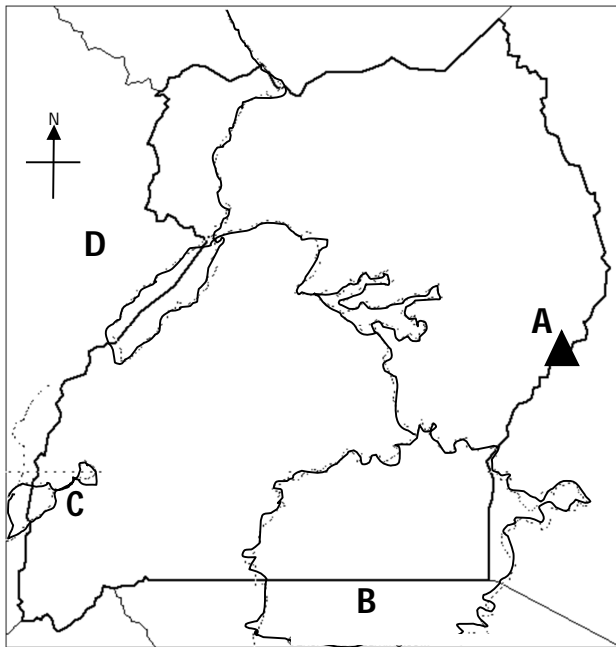
.....

c) Why should a good map have?

i) a key

ii) a title

42. Study the map below and answer the questions that follow.



a) Name the country marked with letter **D**.

.....

b) Which type of coffee grows well on slopes of mountain marked **A**.

.....

c) Name the water body marked with letter **C**.

.....

d) Mention any one economic activity carried out on lake marked **B**.

.....

43. a) What is vegetation?

.....
.....

b) Identify the vegetation zone which covers the largest part of Uganda.

.....

c) State two importance of Vegetation to animals.

i)

ii)

44. a) Write down the importance of the following people in our community.

i) Doctor

.....

ii) Policemen

.....

b) Write the following abbreviations in full.

i) UPE

ii) RGS

45. Match the following people to their roles.

People

Roles

Bursar

Cooks food for children.

Teacher

Collects school fees.

School nurse

teaches pupils

School cook

cares for the sick

i)

ii)

iii)

iv)

46. a) Mention any two weather instruments found in a weather station.

i)

ii)

b) Give the importance of the Stevenson screen box in a weather station.

.....

c) Why is a rain gauge important in a weather station?

.....

47. a) Name any two types of rainfall.

i)

ii)

b) State any two uses of rainfall to people.

i)

ii)

48. a) What is a forest?

.....

.....

b) Give one economic use of forests to man.

.....

c) Write down two natural forest found in Uganda.

i)

ii)

49. a) Why is Uganda called a landlocked country?

.....

b) State any two problems faced by a landlocked country.

i)

ii)

c) Mention one neighbour of Uganda that is landlocked.

.....

50. a) Draw a map symbol of a rift valley in the space below.



b) Write down any two characteristics of rift valley lakes.

i)

ii)

c) Name any one example of a rift valley lake in Uganda.

.....

51. a) What is child abuse?

.....

.....

b) Write down any two forms of child abuse practiced in Uganda today.

i)

ii)

c) Give any one cause of child abuse you know.

.....

52. a) What name is given to the movement of people and their goods from one place to another?

.....

b) State any two causes of road accidents in Uganda today.

i)

ii)

c) Name the quickest means of transport used by people in Uganda.

.....

53. a) Mention any two European explorers who came to Uganda to find the source of River Nile.

i)

ii)

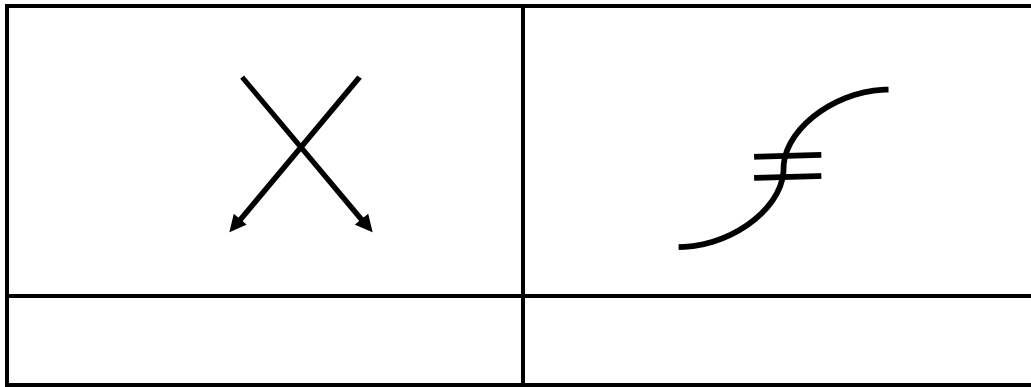
b) Why does River Nile flow north wards?

.....

c) List down any one inland port found on Lake Victoria in Uganda.

.....

54. a) Name the map symbols below.



b) Give any two uses of symbols on a map.

i)

ii)

55. Which products do we get from these crops?

a) Cotton

b) Sugarcane

c) Tobacco

d) Coffee

RELIGIOUS EDUCATION

SECTION A

Answer Either the Christian or Islamic question but not both on the same number.

1. **Either :** In how many days did God create the universe and its occupants?
.....
Or : In how many days did Allah create the universe and its occupants.
.....
2. **Either :** Mention the holy book for Christians.
.....
Or : Mention the holy book for Muslims.
.....
3. **Either :** In which garden did Adam and Eve live?
.....
Or : In which garden did Adam and Hawa live?
.....
4. **Either :** On which day do Christians go for congregational prayers?
.....
Or : On which day do Muslims go for Juma prayers?
.....
5. **Either :** Who was the mother of Jesus?
.....
Or : Who was the mother of Prophet Mohammed?
.....
6. **Either :** Why do Christians pray to God?
.....
Or : Why do Muslims pray to Allah?
.....
7. **Either :** In which town was Jesus born?
.....
Or : In which town was Prophet Mohammed born?
.....
8. **Either :** What is lent period?
.....
.....
Or : What is Ramadan?

-

9. Either : State one role of children as members of the church.

Or : State one role of children in Islam.

- 10. Either :** On which day do Christians celebrate the resurrection of Jesus?

Or : In which month did Prophet receive the Holy Qur'an?

- 11. Either :** Mention any one way of worshipping God.

Or : Mention any one way of worshipping Allah.

- 12. Either :** Who is a martyr?

Or : Who is a martyr?

- 13. Either :** Why do Christians Kneel down during prayers?

Or : Why do Moslems remove their shoes before entering the mosque?

- 14. Either :** Give the importance of baptism to Christians.

Or : Give the importance of circumcision to Muslims.

- 15. Either :** How does a Christian child care for the sick friend?

Or : How can a Moslem child care for a sick friend.

- 16. Either :** Why do Christians repent to Allah?

Or : Why do Moslems repent to Allah?

- 17. Either :** Write down any one religious leader in Christianity.

.....
Or : Write down any one religious leader in Islamic faith.

.....
18. Either : How did Prophet Abraham express his faith in Allah?

.....
Or : How did Prophet Ibrahim express his faith in Allah?

.....
19. Either : Who killed Abel?

.....
Or : Who killed Habel?

.....
20. Either : Which miracle did Jesus perform at Cana?

.....
Or : Give a reason why Prophet Mohammad escaped from Mecca to Madina.
.....

SECTION B

Each question carries four marks

21. Either : a) What is Holy Trinity?
.....
.....

b) Name the persons in the Holy Trinity.
.....

Or : a) What are impurities?
.....
.....

b) Give any three examples of impurities in Islam.

i)

ii)

iii)

22. Either : a) What is faith?
.....
.....

b) Write down any two faithful servants of God according to the Old Testament.

i)

ii)

c) State one value of faith to leaders in the community.

.....

Or : a) What is faith?

.....

.....

b) Write down any two faithful servants of Allah according to the Holy Qur'an.

i)

ii)

c) State one value of faith to leaders in the community.

.....

23. Either : Which important events took place on the following holy days?

i) Palm Sunday

.....

ii) Pentecost day

.....

iii) Easter day

.....

iv) Good Friday

.....

Or : a) Which important events took place on these Holy days?

i) Idd-el-fitri

.....

ii) Idd-aduha

.....

b) Give two reasons why Moslems make pilgrimage to Mecca.

i)

ii)

24. Either : a) Who is a martyr?

.....

.....

b) Who was the first Christian martyr according to the Bible?

.....

c) Where were Uganda martyrs murdered from?

.....

d) What lesson do Christians learn from the acts of the

Uganda martyrs?

Or : a) Who is a martyr?

b) Who was the first Moslem martyr according to the Qur'an?

c) Give any two lessons Muslims learn from the Muslim martyrs.

i)

ii)

25. Either : a) What is a prayer?

b) State any two reasons why Christians pray to God.

i)

ii)

c) Mention any one type of prayer recited by Christians.

Or : a) What is Salat?

b) State any two reasons why Moslems pray to Allah.

i)

ii)

c) Mention any one of the five daily recited prayers of Muslims.

26. Either : a) Who taught the Lord's prayer to the apostles?

b) Write down any three requests made by Christians in the Lord's Prayer.

Or : a) Write down any four of the five pillars of Islam.

i)

ii)

iii)

iii)

27. Either : a) Match the following places in List A with the events in List B correctly.

- | A | B |
|--------------------|-------------------------------|
| Canaan | Jesus was baptised. |
| Mt. Nebo | Jesus walked along water. |
| River Jordan | Moses died from here. |
| Lake Galilee | Promised land for Israelites. |
| | |
| Canaan | |
| Mt. Nebo | |
| River Jordan | |
| Lake Galilee | |

Or : a) Match the following places in List A with the event in List B correctly.

- | A | B |
|-----------------|--------------------------------------|
| Mecca | Prophet Muhammad (PBUH) was stoned. |
| Tait | The first Islamic state. |
| Jerusalem | Muslims perform a pilgrimage. |
| Medina | Prophet Muhammad ascended to heaven. |
| | |
| Mecca | |
| Tait | |
| Jerusalem | |
| Medina | |

28. Either : a) State two ways in which you can help parents at home.
i)
ii)

b) Write any two things that you expect your parents to do for you.
i)
ii)

Or : a) State two ways in which you can help parents at home.
i)
ii)
b) Write down any two good things that you expect your parents to do for you.
i)

ii)
29. Either : a) Give the meaning of the term **parable**.
.....
.....
b) Write any two parables that Jesus used during His teachings.
i)
ii)

Or : a) Give the meaning of the term **Hadith**.
.....
.....
b) Mention Allah's messenger who used Hadith in His teaching
.....
c) State any two lessons that you learn from the messenger in (b) above.
i)
ii)

30. Either : a) What punishment did God give to the following creatures?
i) Adam
.....
ii) Eve
.....
iii) Serpent (snake)
.....
b) How did Adam and Eve disobey God?
.....

Or : a) What punishment did Allah give to the following creature?
i) Adam
.....
ii) Hawa
.....
iii) Serpent (snake)
.....
b) How did Adam and Hawa disobey Allah?
.....

31. Either : a) Name the first two people God created.
i)

ii)

b) Mention the first two sons of people in (a) above.

i)

ii)

Or : a) Name the first two people to be created by Allah.

i)

ii)

b) Mention the first two sons of the people in (a) above.

i)

ii)

32. Either : a) Who is a neighbour according to Christian teaching?

.....

b) How can a true Christian treat his/her enemies?

.....

c) Give any two qualities of a good Christian.

i)

ii)

Or : a) Who is a neighbour according to Islamic teaching?

.....

b) What can a true Moslem do to his/her enemies?

.....

c) Give any two qualities of a good Muslim.

i)

ii)

33. Either : a) Name any two groups of needy people.

i)

ii)

b) State any two way in which Christians can care for the needy.

i)

ii)

Or : a) Name any two groups of needy people.

.....

.....

b) State any two way in which Christians can care for the needy.

i)

ii)

34. Either : a) Why do Christians fast?

-
- b) What name is given to the fasting period of Christians?

- c) How long does the fasting period in Christianity take?

- d) Mention the day which marks the end of the fasting period.

Or :

- a) Why do Muslims fast?

- b) What term is given to the act of fasting in Islam?

- c) How long does the fasting period of Moslems take?

- d) Mention the festival that marks the end of the fasting period in Islam.

35. For Both:

- a) Write down any two similarities between Moslems and Christians.
 i)
 ii)
- b) Give any two differences between Moslems and Christians.
 i)
 ii)

END